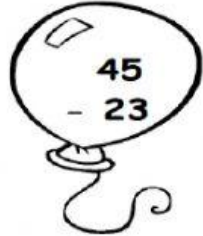


PRACTIQUEMOS RESTAS...

Resuelve las restas y une las que tengan el mismo resultado


$$\begin{array}{r} 17 \\ - 11 \\ \hline \end{array}$$



$$\begin{array}{r} 45 \\ - 23 \\ \hline \end{array}$$

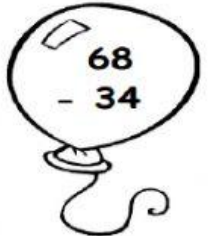

$$\begin{array}{r} 58 \\ - 12 \\ \hline \end{array}$$



$$\begin{array}{r} 76 \\ - 14 \\ \hline \end{array}$$

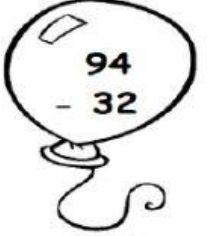

$$\begin{array}{r} 79 \\ - 26 \\ \hline \end{array}$$


$$\begin{array}{r} 44 \\ - 10 \\ \hline \end{array}$$

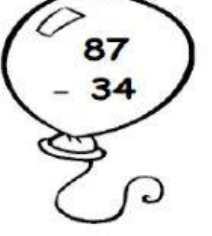

$$\begin{array}{r} 97 \\ - 51 \\ \hline \end{array}$$


$$\begin{array}{r} 68 \\ - 34 \\ \hline \end{array}$$


$$\begin{array}{r} 18 \\ - 2 \\ \hline \end{array}$$


$$\begin{array}{r} 94 \\ - 32 \\ \hline \end{array}$$


$$\begin{array}{r} 59 \\ - 37 \\ \hline \end{array}$$


$$\begin{array}{r} 87 \\ - 34 \\ \hline \end{array}$$