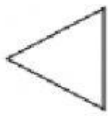


Regular Polygons Math Concepts

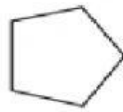
Polygons are named for the number of sides they have.



triangle



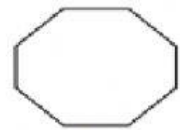
quadrilateral



pentagon



hexagon



octagon

Quadrilaterals, which have four sides, can be different shapes.



rectangle



rhombus



square

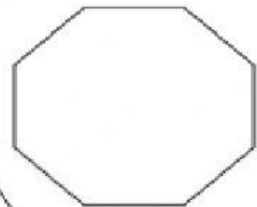
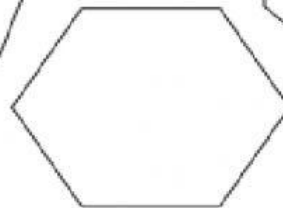
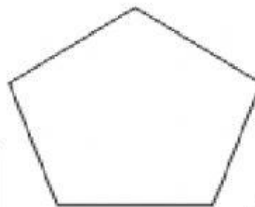
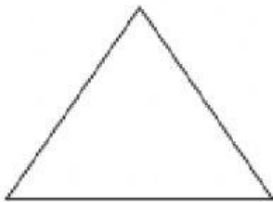


parallelogram



trapezoid

Here are 5 regular polygons.

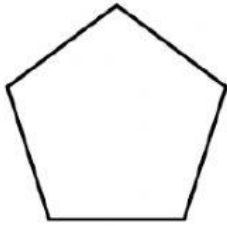


Instructions: Write the number of sides and angles for the polygons

Name of Polygons	Sides	Angles
quardilateral		
pentagon		
octagon		
hexagon		
triangle		

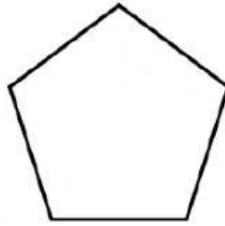
Identify the Type For Each Regular Polygon.

1)



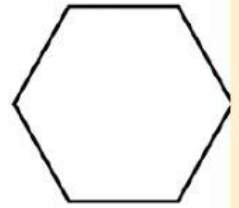
Type: _____

2)



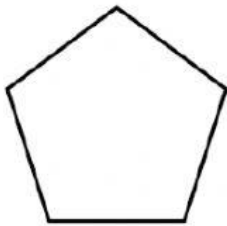
Type: _____

3)



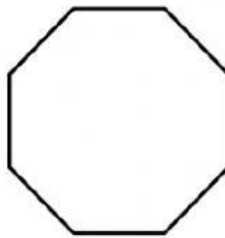
Type: _____

4)



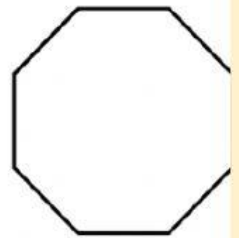
Type: _____

5)



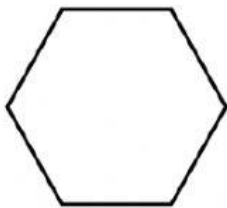
Type: _____

6)



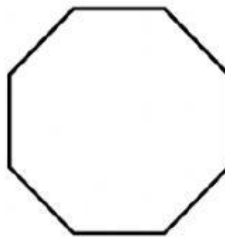
Type: _____

7)



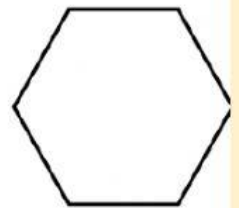
Type: _____

8)



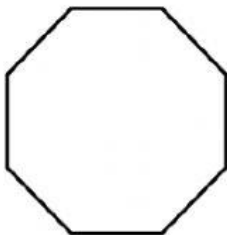
Type: _____

9)



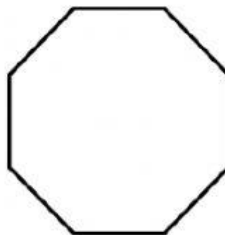
Type: _____

10)



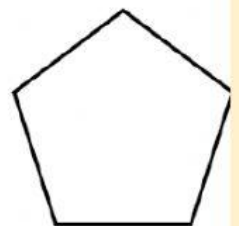
Type: _____

11)



Type: _____

12)



Type: _____

Regular and Irregular Shapes

Write 'regular' or 'irregular' next to each shape, according to the properties of the shape.



