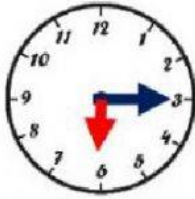
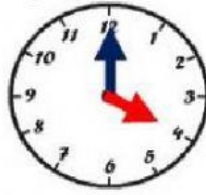
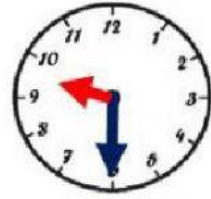
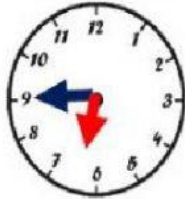
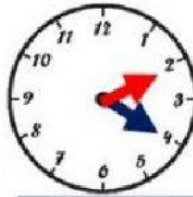
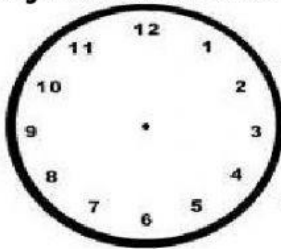


Escribe la hora que marca cada reloj.

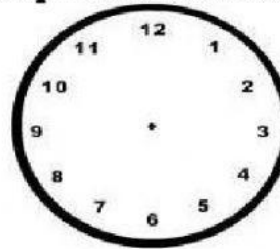

 : 

 : 

 : 

 : 




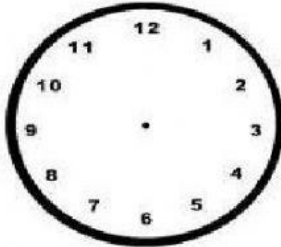

Dibuja las manecillas marcando las horas que se te indican.



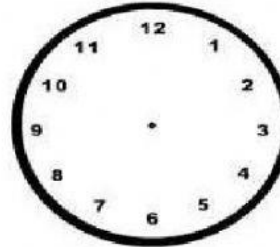
3:15



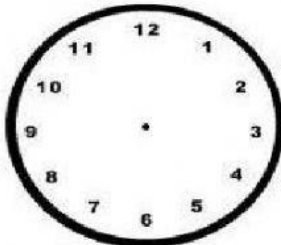
5:50



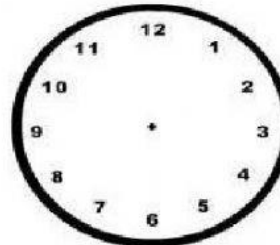
10:05



12:00



6:30



8:25

Coloca el nombre a las partes del reloj analógico.

