

UNIT 3 HUMAN

Activity 1: Types of Teeth and Their Functions, Structure of Tooth

A Match the tooth with the correct name and function.

6



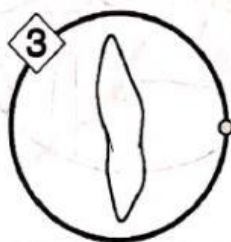
Canine tooth

Cutting food



Molar tooth

Tearing food



Incisor tooth

Grinding food

B Label the cross section of the tooth structure below.

5

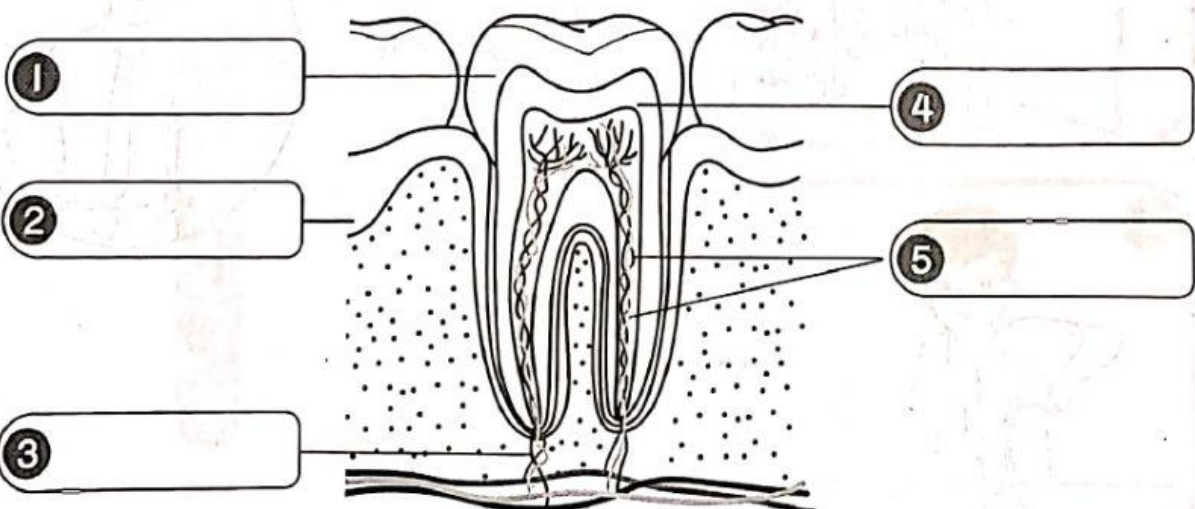
nerve

blood vessel

dentine

gum

enamel



Name: _____

Date: _____

UNIT 3 HUMAN

Textbook: pages 34-35

Activity 2: Milk Teeth and Permanent Teeth

Complete the comparison table of a milk teeth set and permanent teeth set.

5

Milk teeth set	Permanent teeth set
Similarity	
1 Consists of incisor teeth, _____ teeth and canine teeth.	
Differences	
20 teeth	2 _____ teeth.
3 _____ teeth.	Permanent teeth
Small and weak	4 _____ and strong.
5 Enamel and dentin layers are _____.	Enamel and dentin layers are thick.
Grow from the age of 6 months – 3 years	Grow from the age of 6 years – 21 years



My achievements today

Scanned with CamScanner




LIVEWORKSHEETS

UNIT 3 HUMAN

Activity 3: Dental Care

Type 'Healthy Tooth' or 'Bad Tooth' in the blank box.

4

1	I eat a lot of sweets but I am lazy to brush my teeth.		
2	I brush my teeth in the morning and before I sleep.		
3	I always use floss or gargle after eating.		
4	I see a dentist every three years.	