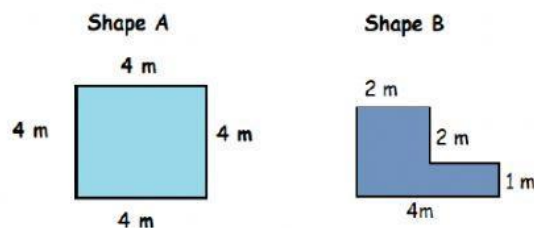


Thursday 17th June 2021

Revision test #5

Do the following questions. Do your working in your Mathematics notebook and type your answers in the boxes provided.

1.



a) What is the perimeter of shape A? Answer _____m.

b) What is the area of shape A? Answer _____m²

c) What is the area of shape B? Answer _____ m²

2. If a square has an area of 25 cm², what is the length of a side of the square? Answer _____ cm

3. The favourite pets of a group of students are shown below

Favourite pets

Pets	Tally	Frequency
dogs		12
cats		
birds		
fish		

a) Complete the tally chart by typing in the missing frequencies in the boxes provided.


b) What was the least favourite pet? Answer = _____

c) How many more students like dogs than cats?
Answer= _____more students like dogs than cats.

d) How many students were there in all ?

Answer _____ students.

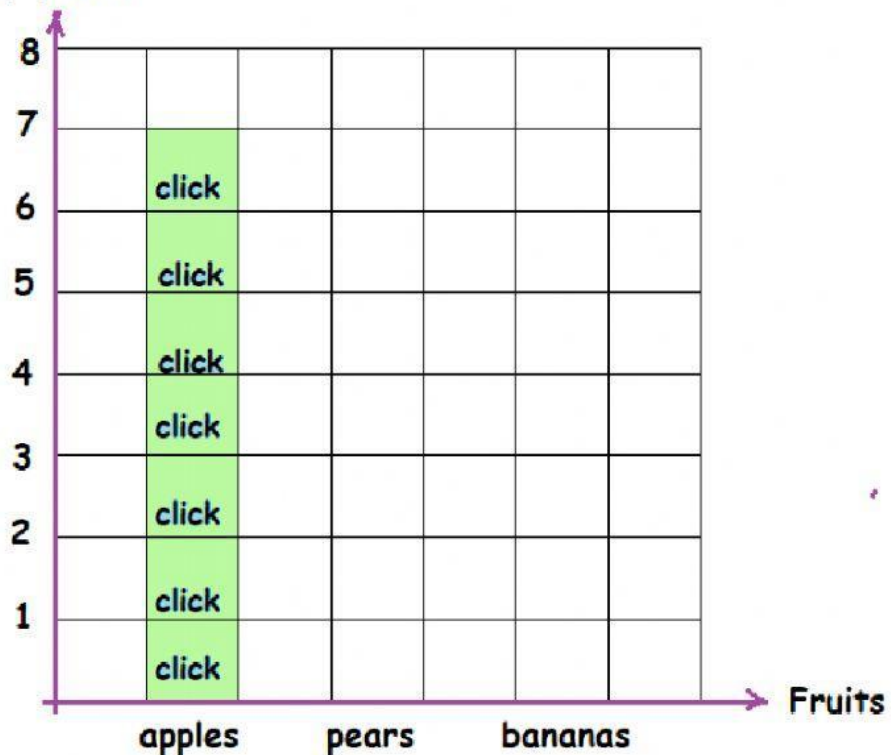
4. The bag below contains apples, pears and bananas.



a) Complete the bar chart below for the number of fruits in the Bag.

The number of fruits in a bag

Number
of fruits



b) Which fruit was the most in the bag? Answer _____

c) How many fruits were there in all? Answer _____ fruits

d) What was the total cost of the pears, if one pear cost \$4?
Answer \$ _____