

Name :



RECOGNISE 2-D SHAPES

Activity 1

Square	Rectangle
Circle	Triangle

1

write the name of the 2-D shape.

a



b



c

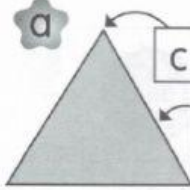


d



2 Complete the words.

a




c o n r

s t i h

s d

b



c r v d

s d

c




o r e

s i t

s e

d



Activity 2

1 Match.



3 straight sides



4 straight sides



















4 equal straight sides



1 curved side

2 Tick (✓) the object that has the same surface as the 2-D shape given.

a			<input type="checkbox"/>		<input type="checkbox"/>		<input type="checkbox"/>
b			<input type="checkbox"/>		<input type="checkbox"/>		<input type="checkbox"/>
c			<input type="checkbox"/>		<input type="checkbox"/>		<input type="checkbox"/>
d			<input type="checkbox"/>		<input type="checkbox"/>		<input type="checkbox"/>