

CÁLCULO

1. Une con flechas los números que suman **100**.

25

9

43

30

81

48

70

83

52

75

17

57

2. Calcula.

$70 + 30 = \square$

$33 + 67 = \square$

$60 + 40 = \square$

$23 + 77 = \square$

$50 + 50 = \square$

$41 + 59 = \square$

$32 + 17 = \square$

$42 + 46 = \square$

$64 + 23 = \square$

$65 + 12 = \square$

$28 + 31 = \square$

$76 + 22 = \square$

$78 + \square = 100$

$57 + \square = 100$

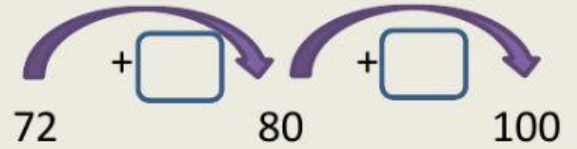
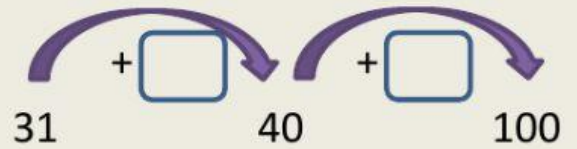
$90 + \square = 100$

$53 + \square = 100$

$44 + \square = 100$

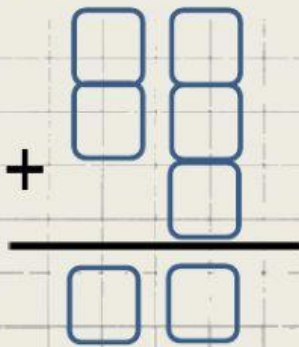
$67 + \square = 100$

3. ¿Cuánto falta para llegar?

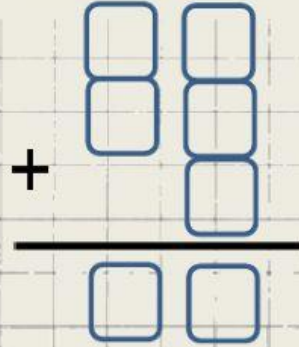


4. Realiza las siguientes operaciones. Ojo a las sumas con llevadas.

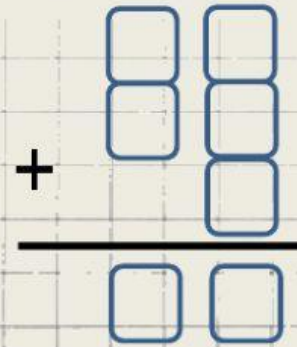
$$26 + 12 + 7$$



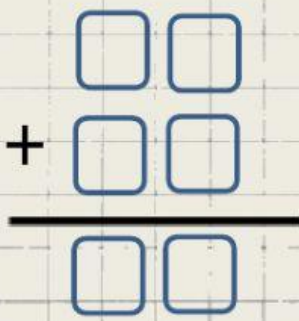
$$35 + 27 + 5$$



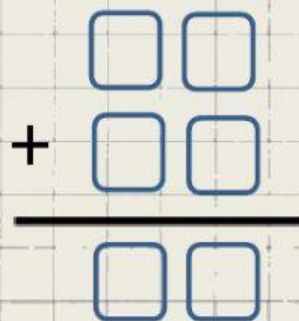
$$47 + 37 + 4$$



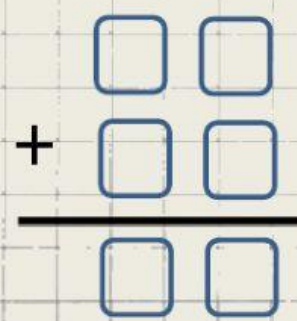
$$59 + 35$$



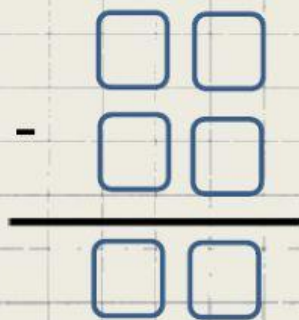
$$48 + 37$$



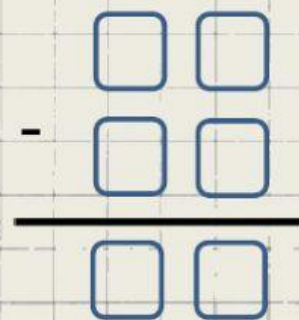
$$39 + 18$$



$$91 - 40$$



$$89 - 34$$



$$78 - 47$$

