



SUMAS

Soled@d TG



$$\begin{array}{r} 4 \\ \hline \end{array} + \begin{array}{r} 4 \\ \hline \end{array} = \square$$

10





$$\begin{array}{r} 5 \\ \hline \end{array} + \begin{array}{r} 5 \\ \hline \end{array} = \square$$



8

SUMAS

Soled@d TG

 $+$ 

 3 $+$ 3 $=$ 9

 $+$ 

 5 $+$ 4 $=$ 6

SUMAS

Soled@d TG

$$\begin{array}{c} 2 \\ \bullet \bullet \end{array} + \begin{array}{c} 2 \\ \bullet \bullet \end{array} = \square \quad 6$$

$$\begin{array}{c} 2 \\ \bullet \bullet \end{array} + \begin{array}{c} 3 \\ \bullet \bullet \bullet \end{array} = \square \quad 4$$

$$\begin{array}{c} 2 \\ \bullet \bullet \end{array} + \begin{array}{c} 4 \\ \bullet \bullet \\ \bullet \bullet \end{array} = \square \quad 5$$