

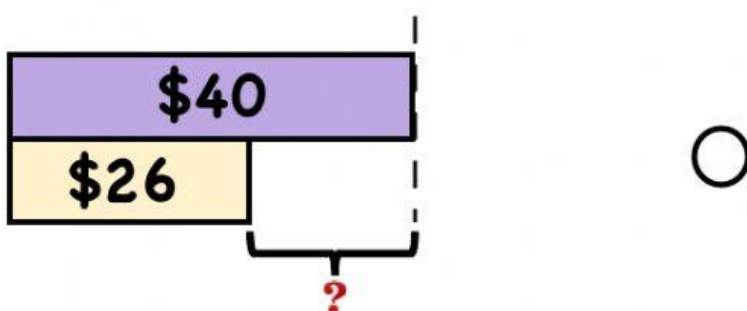
Saturday, 30th October 2021 Name: _____

Solve these word problems.
choose the correct model.

1. Fitri has \$40.

He buys a shirt.

How much money does he have left?

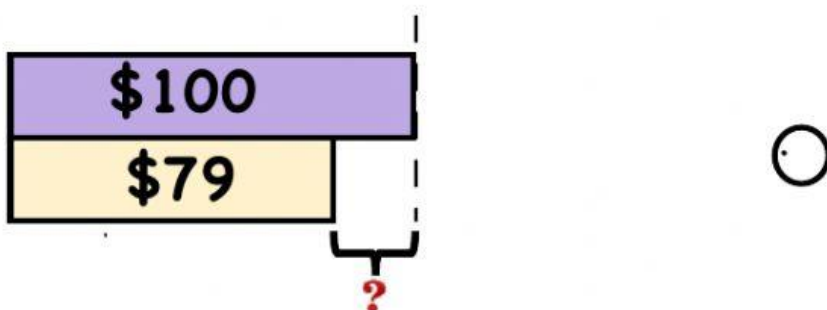



He has \$_____ left.

2. Ayatul buys a camera.

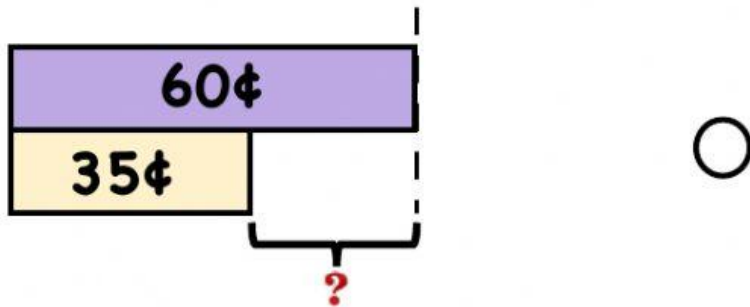
She gives the cashier a \$100 note.

How much change does she receive?



She receives \$_____ change.

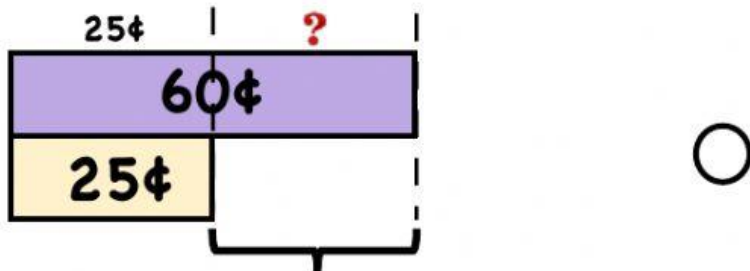
3. Dasuki buys the food as shown.
How much money does he pay?



He pays _____ ¢



4. How much more does the pencil cost than the eraser?



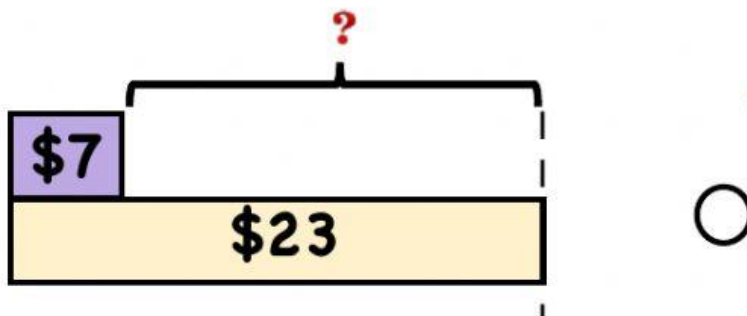
The pencil costs _____ ¢ more than the eraser.



5. Lugman has \$7.

He wants to buy the book.

How much more money does he need?



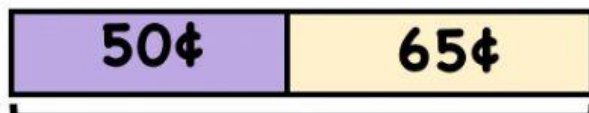
He needs \$_____ more.

6. Mateen spends 95¢ during recess.


What does he buy?




95¢



95¢



95¢



95¢



hot milo

50¢



sandwich

65¢



bun

45¢

He buys a _____ and a _____.