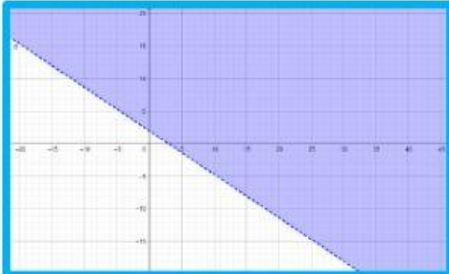


SOAL EVALUASI HARIAN

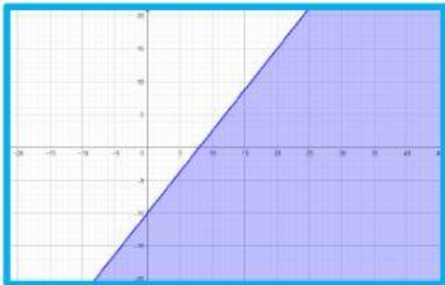
NAMA :

KELAS :

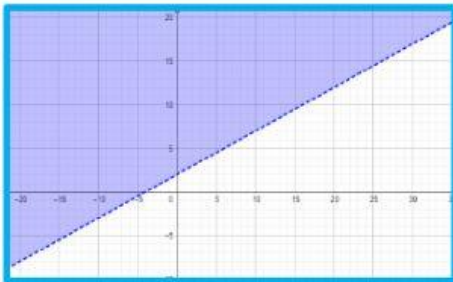
Pasangkan setiap grafik di bawah ini sesuai dengan pertidaksamaannya!



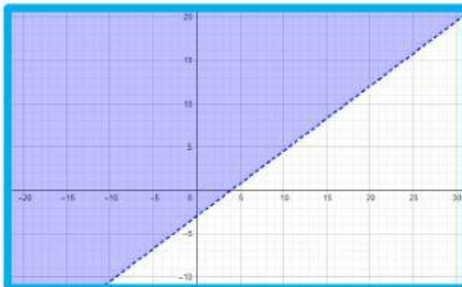
$$-10x - 5y \leq 20$$



$$-2x + 4y > 8$$



$$3x - 4y < 12$$



$$2x + 3y > 6$$



$$5x - 4y \geq 40$$