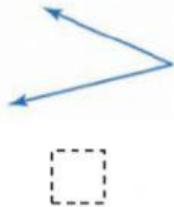
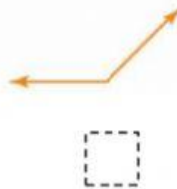


Task 1: Tick at the **right angle**.

a.



b.



c.



Task 2: Tell the angle formed by the hands of the clock is a right angle or not right angle.

a.



b.



c.



Task 3: Fill in the blank: How many **right angles** in each shape?

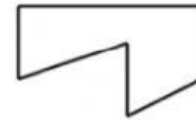
a.

___ right angles



b.

___ right angles



Task 4*: Explain why these two rays do not form an angle.

