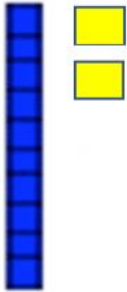



Mathematics
Teen family numbers

Instructions: Type how many tens and ones.

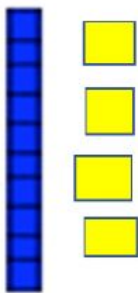
a.



tens ____ ones ____ = ____



tens ____ ones ____ = ____



tens ____ ones ____ = ____



tens ____ ones ____ = ____

Answer the following questions.

How many group of tens are in teen numbers? ____

What number does all teen family numbers begin with? ____

b. Click the numbers that doesn't belong

3 12 15 4 19 17 13 5