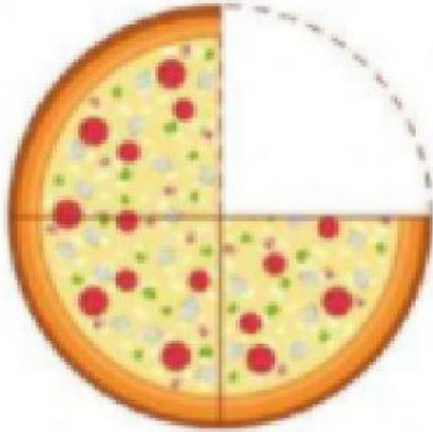
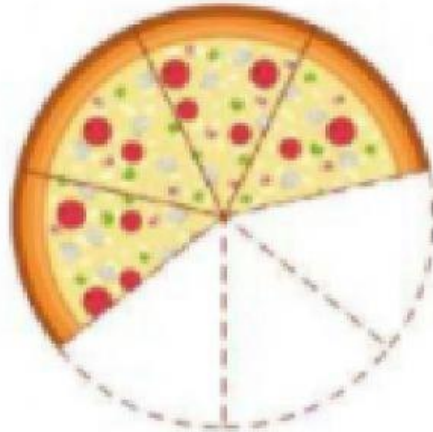
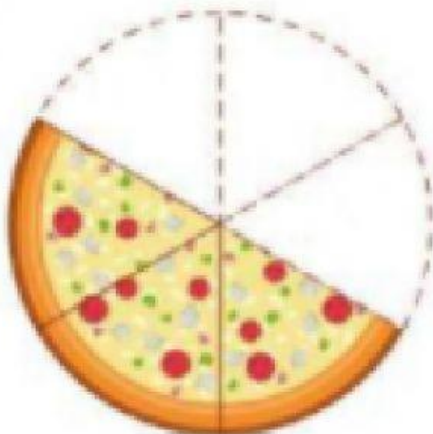
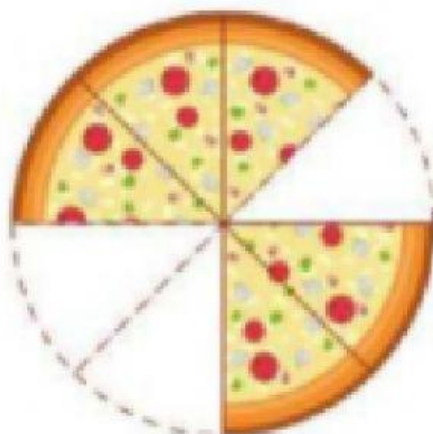
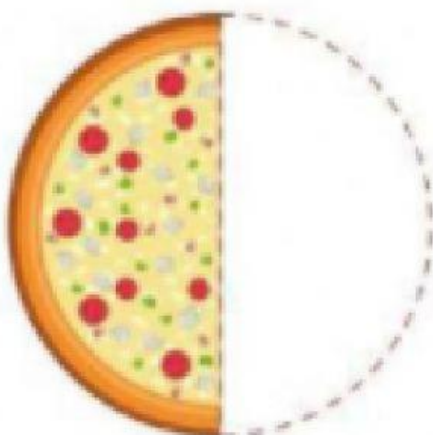
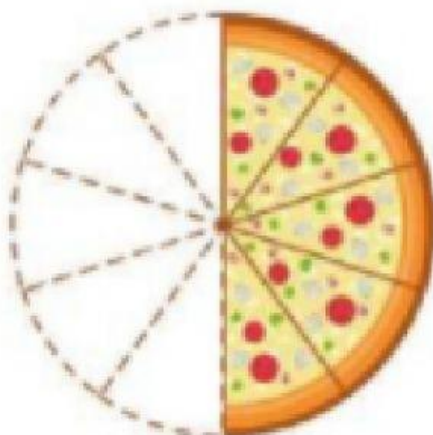


Componente curricular: Matemática

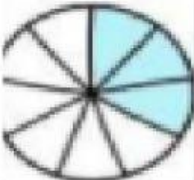


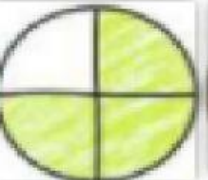


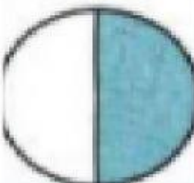



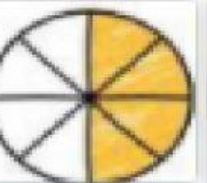

Escreva as frações que representam as pizzas:

ARRASTE CADA FIGURA EM SUA FRAÇÃO CORRESPONDENTE.

LEMBRE-SE: $\frac{\text{NUMERADOR}}{\text{DENOMINADOR}}$ —> NÚMERO DE PARTES QUE FORAM RETIRADAS DO INTEIRO
 —> NÚMERO DE PARTES QUE O INTEIRO FOI DIVIDIDO

$\frac{3}{9}$	$\frac{3}{6}$	$\frac{8}{9}$
$\frac{4}{5}$	$\frac{3}{4}$	$\frac{1}{10}$
$\frac{1}{3}$	$\frac{4}{8}$	$\frac{5}{7}$
$\frac{3}{9}$	$\frac{3}{3}$	$\frac{1}{2}$

Ligue:

$$\frac{5}{9}$$

$$\frac{2}{8}$$

$$\frac{8}{12}$$

$$\frac{3}{5}$$

$$\frac{4}{10}$$

$$\frac{3}{6}$$

TRÊS TERÇOS

TRÊS SEXTOS

UM NONO

QUATRO DÉCIMOS

DOIS DÉCIMOS

TRÊS QUINTOS

UM QUARTO

OITO DOZE AVOS

TRÊS SÉTIMOS

DOIS OITAVOS

QUINZE MEIO

CINCO NONOS

$$\frac{15}{2}$$

$$\frac{3}{7}$$

$$\frac{1}{4}$$

$$\frac{2}{10}$$

$$\frac{1}{9}$$

$$\frac{3}{3}$$