




Name: _____

Who Am I?

Directions: Label the name of each tool used for measurement.

Tool	Name	Description
	r _____	
	y _____ s _____ *similar to a meter stick	
	t _____ m _____	

Directions: Think about the size of each object and what tool would be best to measure it. Write: **ruler**, **yard stick**, or **tape measure**.

1. Length of a pencil _____
2. Length of the classroom _____
3. Length of a desk _____

Name: _____

HOMEWORK

Who Am I?

Directions: Read and solve each riddle to match a tool used for measurement. Use the word bank to spell each answer correctly.

ruler

yard stick

tape measure

1. I am used to measure large things. A construction worker might use me often. I have both inches and feet marked on me.

Who am I? _____

2. I am used to measure small things. I might be used in a classroom or for making crafts. I can measure up to 12 inches.

Who am I? _____

3. I am used to measure medium-sized things. I might be used for making straight lines on posters. I can measure up to 3 feet or 36 inches.

Who am I? _____

Directions: For each tool, write something in your house you would use this tool to measure.

1. ruler: _____

2. tape measure: _____

3. yard stick: _____