


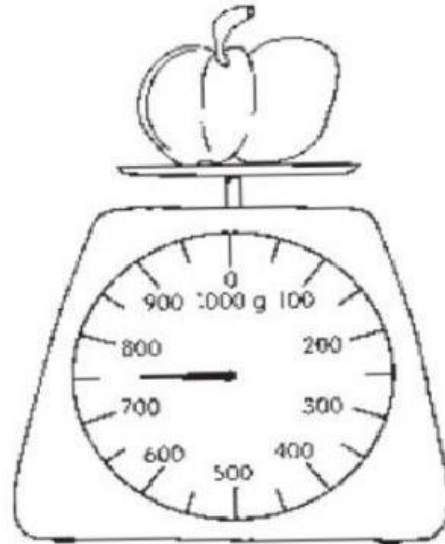
Practice 7 Comparing Masses in Grams

1. Mother buys some vegetables from the market.
Write down the masses of these vegetables in the boxes.
Then, fill in the blanks.



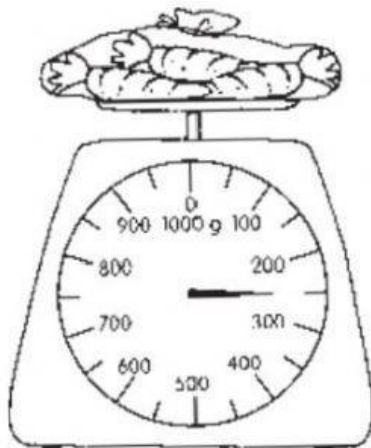
celery

g



pumpkin

g



bag of carrots

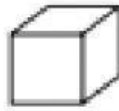
g



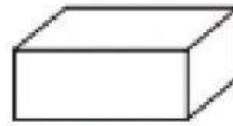
bag of lady's fingers

g

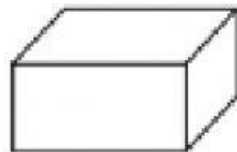
2. Look at the parcels.



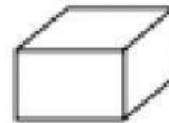
Parcel A
180 g



Parcel B
250 g



Parcel C
800 g



Parcel D
430 g

(a) Which is the heaviest? _____

(b) Which is the lightest? _____

(c) Write **heavier** or **lighter** on the blanks.

Parcel B is _____ than Parcel D.

Parcel D is _____ than Parcel A.

(d) Parcel C is _____ g heavier than Parcel B.

(e) Parcel A is _____ g lighter than Parcel C.