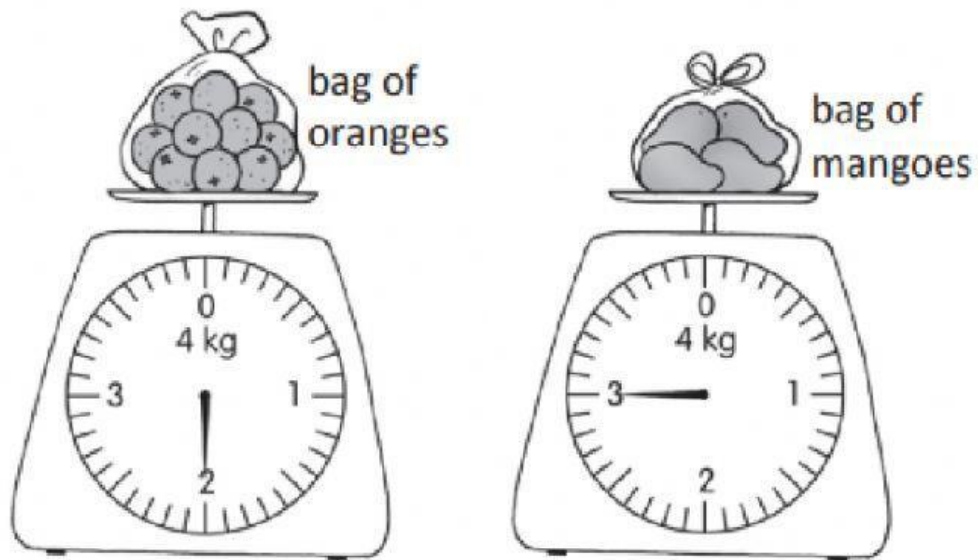


Practice 5 Comparing Masses in Kilograms


1.



- (a) The mass of the bag of oranges is _____ kg.
(b) The mass of the bag of mangoes is _____ kg.
(c) Which bag is lighter? _____
(d) Which bag is heavier? _____
How much heavier? _____ kg

3. Fill in the blanks.

(a)



Nurul has a mass of _____ kg.

(b)



Hasri has a mass of _____ kg.

(c) Who is heavier, Nurul or Hasri? _____

How much heavier? _____ kg

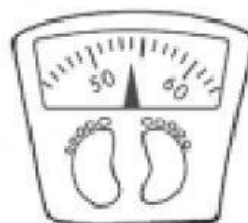


Hasri

?

?

?



Nurul