

Practice 4 Measuring Mass in Kilograms

1. Fill in the blanks.

more than
parcel

less than
cake

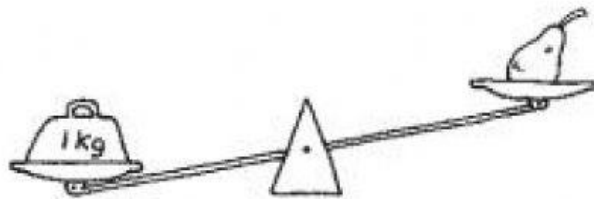
as heavy as
pear

(a)




The cake is _____ 1 kg.

(b)



The mass of the pear is _____ 1 kg.

(c)



The mass of the parcel is _____ 1 kg.

(d) The _____ is the lightest.

(e) The _____ is the heaviest.

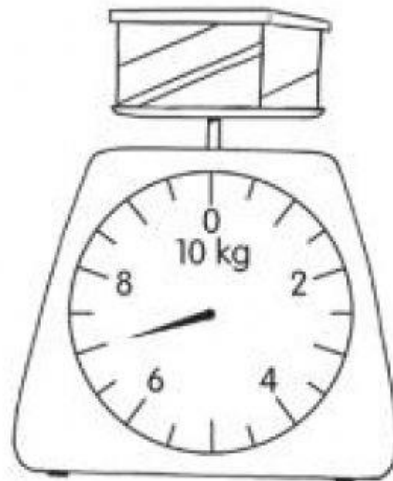
2. Read the scales and fill in the blanks.

(a)



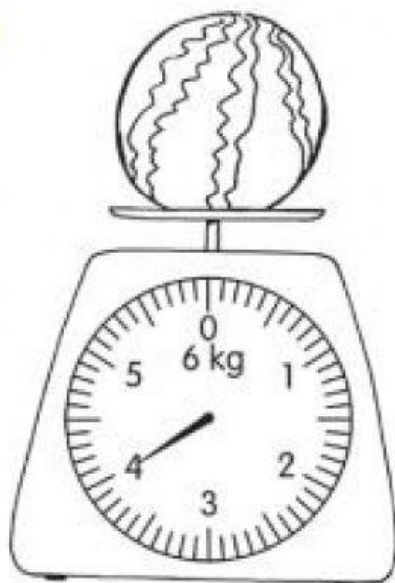
_____ kg

(b)



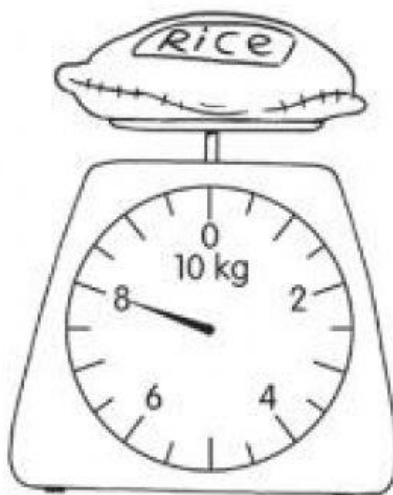
_____ kg

(c)



_____ kg

(d)



_____ kg