

KINGDOM OF BAHRAIN
NEW GENERATION PRIVATE SCHOOL
S.Y. 2021 – 2022
Mathematics Worksheet

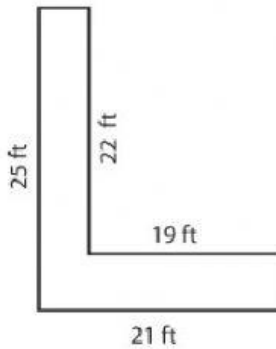
Chapter 4: Area and Perimeter

Name: _____

Class: Grade: 5

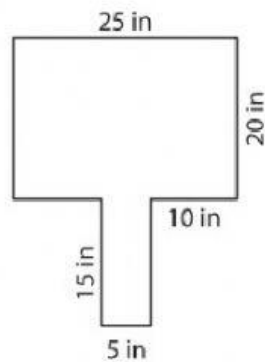
Find the Perimeter of each shape:

1)



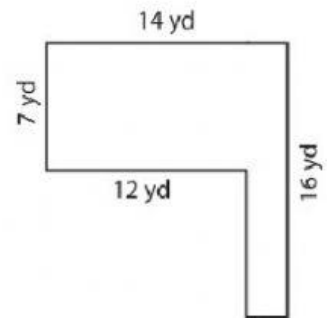
Perimeter = _____

2)



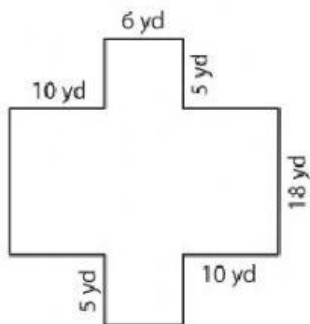
Perimeter = _____

3)



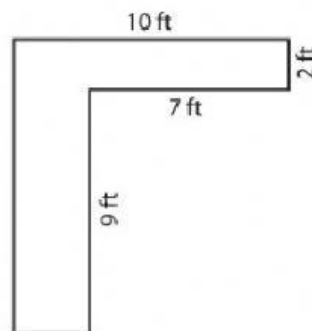
Perimeter = _____

4)



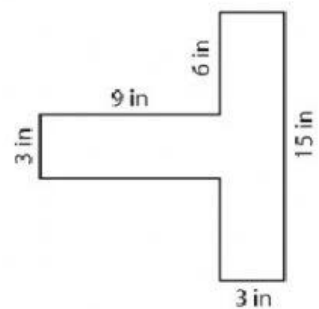
Perimeter = _____

5)



Perimeter = _____

6)



Perimeter = _____