



San Francisco Catholic School

Second Grade

Miss. Lainez

Math Exam



Instructions: read each statement carefully and complete the exercises according to what is asked.

Complete 5%

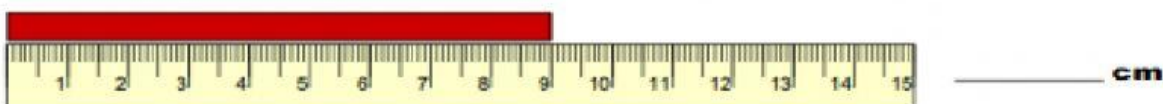

Observe the conversion chart and complete the exercises.

Unit	Conversation
1 meter (m)	100 centimeters (cm)
1 meter (m)	10 decimeters (dm)
100 centimeters (cm)	1 meter (m)

2 meters: _____ cm **3 m =** _____ dm **100 cm =** _____ m

500 m = _____ cm **1 m =** _____ dm

Observe the picture and measure each bar in centimeters



Add and Subtract 4%

Meters		Centimeters	
1	3	5	6
+	2	2	3

Meters		Centimeters	
3	5	5	6
-	2	1	3

Meters		Centimeters	
7	7	9	4
+	1	1	3

Meters		Centimeters	
6	8	3	4
-	1	2	2

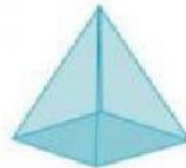
Match 6%

Identify the solid shapes choosing their names from the word box.

1)



2)



3)



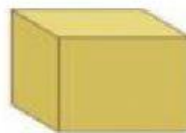
4)



5)



6)



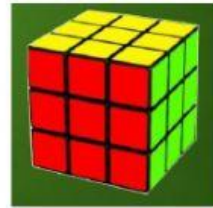
cylinder
sphere

cone
rectangular prism

pyramid
cube

Classify 2.5%

Classify if the picture has curved or flat. Write “c” if it has curved surfaces or “f” if it has flat surfaces



Write 2.5%

Write the value for each group of bills. Look at the example.

1.



Lps. 50

2.



3.



4.



5.




6.



Write 5%

Observe de clocks and say the hours.

What time is it?



3:00

