



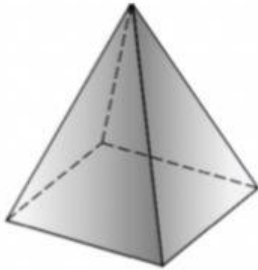


CHAPTER 7 Shapes

A Based on the following three dimensional shapes, name the shape and complete the characteristics. **TP1**

<p>1</p>  <p>Cube</p> <p>(a) <input type="text"/> flat square faces</p> <p>(b) <input type="text"/> vertices</p> <p>(c) <input type="text"/> straight edges</p>	<p>2</p>  <p><input type="text"/></p> <p>(a) <input type="text"/> flat rectangular faces</p> <p>(b) <input type="text"/> vertices</p> <p>(c) <input type="text"/> straight edges</p>
<p>3</p>  <p><input type="text"/></p> <p>(a) <input type="text"/> curved face</p> <p>(b) <input type="text"/> flat faces</p>	<p>4</p>  <p><input type="text"/></p> <p>(a) <input type="text"/> curved face</p> <p>(b) <input type="text"/> flat face</p> <p>(c) <input type="text"/> vertex</p>
<p>5</p>  <p><input type="text"/></p> <p>(a) <input type="text"/> flat triangular faces</p> <p>(b) <input type="text"/> flat square face</p> <p>(c) <input type="text"/> vertices</p> <p>(d) <input type="text"/> straight edges</p>	