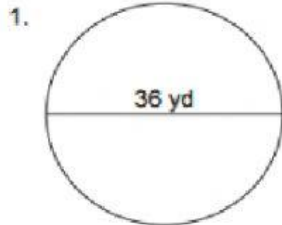


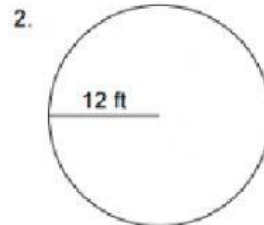
Circumference of a circle

Find the circumference of each circle from the given radius or diameter =

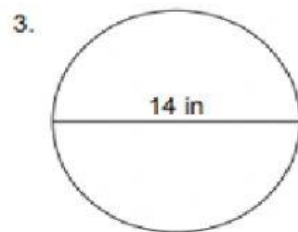
Let $\pi = 3.14$



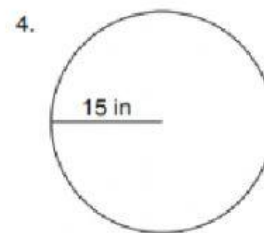
C = _____ yd



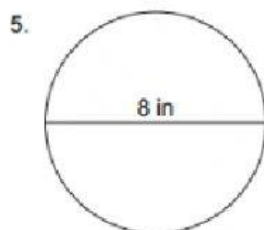
C = _____ ft



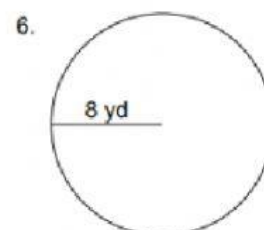
C = _____ in



C = _____ in



C = _____ in



C = _____ yd

(7) Given that the diameter of a circle is 42 cm. What is the circumference

$\pi = \frac{22}{7}$

C = _____ =CM

