

FRACCIONES EQUIVALENTES

Ayuda a cada explorador a encontrar las dos fracciones equivalentes del rectángulo.



$$\frac{2}{4}$$

$$\frac{4}{8} \quad \frac{6}{16} \quad \frac{5}{12} \quad \frac{10}{20}$$



$$\frac{3}{6}$$

$$\frac{9}{12} \quad \frac{12}{24} \quad \frac{6}{12} \quad \frac{18}{6}$$



$$\frac{2}{10}$$

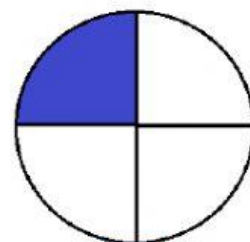
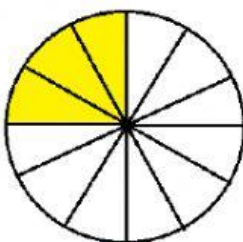
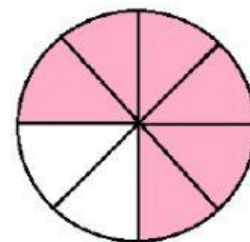
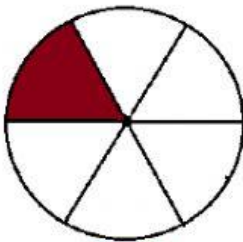
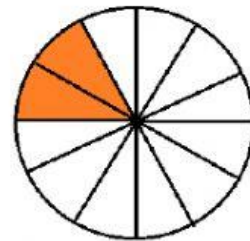
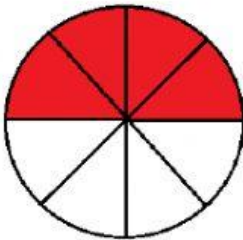
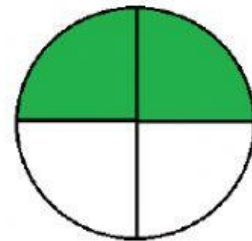
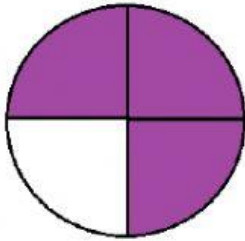
$$\frac{4}{20} \quad \frac{8}{40} \quad \frac{10}{2} \quad \frac{6}{15}$$



$$\frac{5}{8}$$

$$\frac{10}{4} \quad \frac{15}{24} \quad \frac{10}{16} \quad \frac{5}{5}$$

Escribe las fracciones que representan cada figura, y una cada una con su equivalencia.



Elaborado por:
Julieth Paola Obando