

MONEY (2): ADDING IN DOLLARS.

Write the missing amounts. Name: _____

Example



\$25

+



\$50

=

\$75

Q1.



\$

+




\$

=


\$

Q2.



\$

+




\$

=


\$

Q3.



\$

+



\$

=

\$

RHS/2021