

NAMA :

KELAS :

Nilai Wang

Padankan gambar dengan nilai wang.

The worksheet contains four money bags and their corresponding value options:

- Bag a:** Contains one 20 sen coin. Value options: 30 sen, 70 sen.
- Bag b:** Contains one 50 sen coin. Value options: 30 sen, 70 sen.
- Bag c:** Contains one 20 sen coin and one 10 sen coin. Value options: 20 sen, 50 sen.
- Bag d:** Contains one 50 sen coin and one 20 sen coin. Value options: 20 sen, 50 sen.

Sepuluh sen

Dua puluh sen

Lima puluh sen

Empat puluh sen

Enam puluh sen

10 sen

20 sen

50 sen

40 sen

60 sen

2 Tulis nilai wang berikut.

a



Lima sen

5 sen

b



c



d



e



f



Sepuluh ringgit

Dua ringgit

Lima ringgit

Sepuluh ringgit

Tujuh ringgit

RM10

RM2

RM5

RM10

RM7


Aktiviti 2

1 Tulis nilai wang berikut.



Satu ringgit

RM1



RM10

RM6

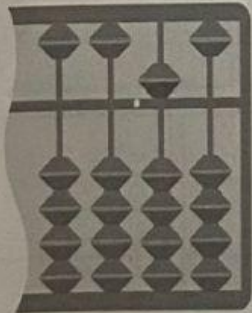
5 sen

90 sen

RM8


2 Tulis nilai wang yang diwakili abakus.

a




50 sen

b




c



d



e



f

