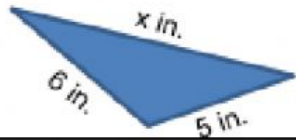
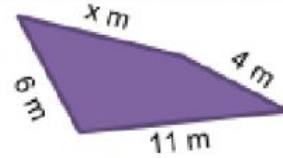


Nama :

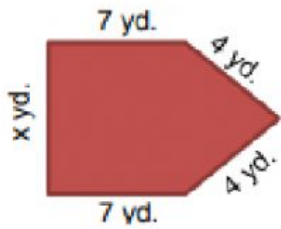
Menemukan panjang sisi yang belum diketahui



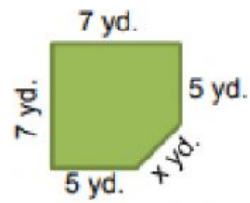
Jika keliling = 19, nilai $x =$



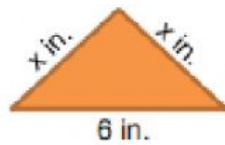
Jika keliling = 28, nilai $x =$



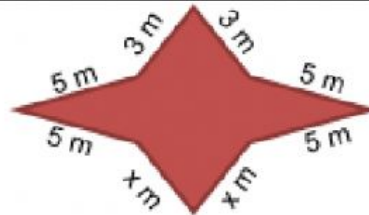
Jika keliling = 28, nilai $x =$



Jika keliling = 27, nilai $x =$



Jika keliling = 16, nilai $x =$



Jika keliling = 34, nilai $x =$