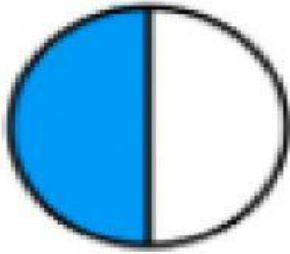
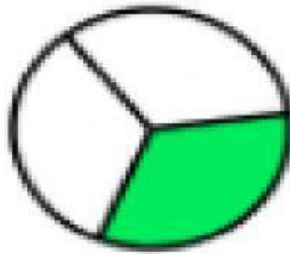


Matemática

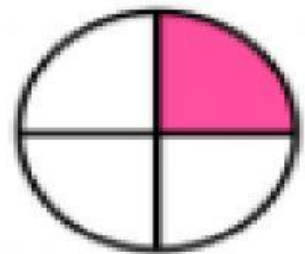
Fracciones de 1 a 10



$$\frac{1}{\square}$$

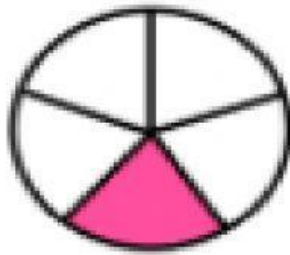


$$\frac{1}{\square}$$

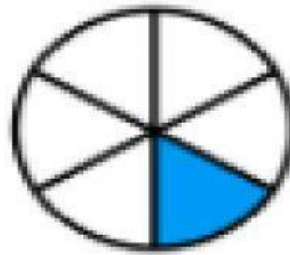


$$\frac{1}{\square}$$

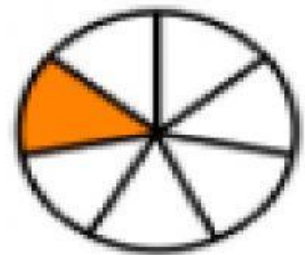
edufichas.com



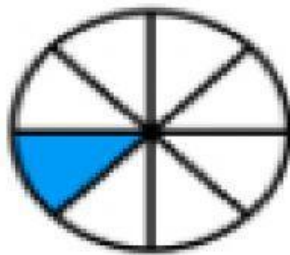
$$\frac{1}{\square}$$



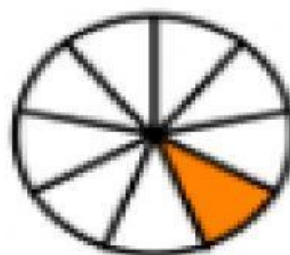
$$\frac{1}{\square}$$



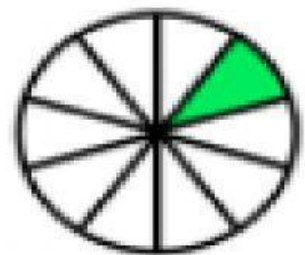
$$\frac{1}{\square}$$



$$\frac{1}{\square}$$






























$$\frac{1}{\square}$$



$$\frac{1}{\square}$$

Expresión de las fracciones en la escritura

SEÑALAR CON LAPIZ DIGITAL

	$\frac{1}{2}$			Un séptimo Séptima parte
	$\frac{1}{3}$			Un octavo Octava parte
	$\frac{1}{4}$			Un noveno Novena parte
	$\frac{1}{5}$			Un décimo Décima parte
	$\frac{1}{6}$			Un medio Mitad
	$\frac{1}{7}$			Un tercio Tercera parte
	$\frac{1}{8}$			Un cuarto Cuarta parte
	$\frac{1}{9}$			Un quinto Quinta parte
	$\frac{1}{10}$			Un sexto Sexta parte

¿PARA QUÉ NOS PUEDE SER ÚTIL LAS FRACCIONES PARA NUESTRO DIARIO VIVIR?