










Name: _____ Date: _____

Measuring Weight

- I. Look at the following pictures and decide if each item weighs more or less than a kilogram (Kg). Use a checkmark ✓ to click on the right answer.

 <p><input type="radio"/> a) < 1 kg</p> <p><input type="radio"/> b) > 1 kg</p>	 <p><input type="radio"/> a) < 1 kg</p> <p><input type="radio"/> b) > 1 kg</p>	 <p><input type="radio"/> a) < 1 kg</p> <p><input type="radio"/> b) > 1 kg</p>
 <p><input type="radio"/> a) < 1 kg</p> <p><input type="radio"/> b) > 1 kg</p>	 <p><input type="radio"/> a) < 1 kg</p> <p><input type="radio"/> b) > 1 kg</p>	 <p><input type="radio"/> a) < 1 kg</p> <p><input type="radio"/> b) > 1 kg</p>
 <p><input type="radio"/> a) < 1 kg</p> <p><input type="radio"/> b) > 1 kg</p>	 <p><input type="radio"/> a) < 1 kg</p> <p><input type="radio"/> b) > 1 kg</p>	 <p><input type="radio"/> a) < 1 kg</p> <p><input type="radio"/> b) > 1 kg</p>