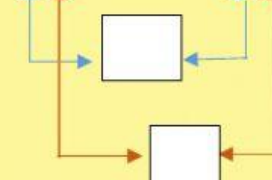


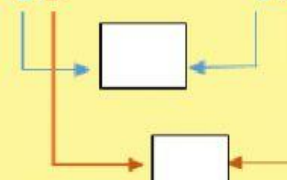
RELACIÓN DE SECUENCIA Y DE ORDEN

1. Compara y escribe el símbolo $>$ mayor que, $<$ menor que o $=$ igual según corresponda.

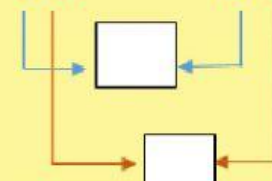
1) 28 38



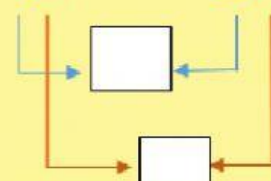
2) 65 42



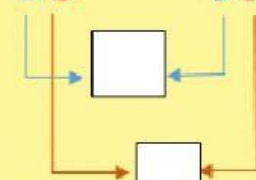
3) 96 53



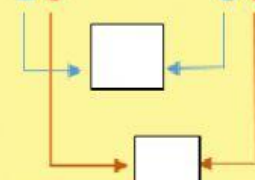
4) 44 49



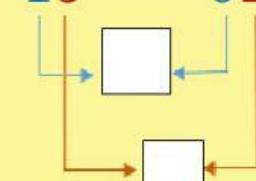
5) 25 38



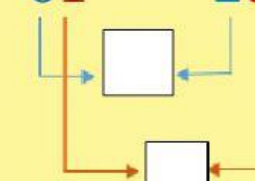
6) 19 83



7) 15 92



8) 61 29



Profe. Milly