





Name \_\_\_\_\_

## HALLOWEEN MATH



How many of each picture do you see? Write in the numbers and then complete the equation. The first one has been done for you.

$$\boxed{1} \text{  } + \boxed{1} \text{  } = \boxed{2}$$



---

$$\boxed{\phantom{00}} \text{  } + \boxed{\phantom{00}} \text{  } = \boxed{\phantom{00}}$$

---

$$\boxed{\phantom{00}} \text{  } + \boxed{\phantom{00}} \text{  } = \boxed{\phantom{00}}$$

---

$$\boxed{\phantom{00}} \text{  } + \boxed{\phantom{00}} \text{  } = \boxed{\phantom{00}}$$

---