

Yuruusti School

Elementary, III Trimester

Science Quiz #2



Estimated Time: 30 minutes

Total points: 13 pts

Percentage: 5%

Teacher: Cristhel Campos Guevara.

Level: 1st Grade

Grade: 1- _____

Points obtained: _____.

Percentage obtained: _____.

Grade: _____.

Date: _____

Name: _____

Parent's Signature: _____

General Instructions:

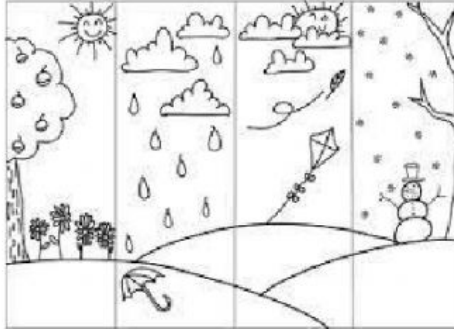
- 1. Read the instructions carefully.*
- 2. Be clear and neat. Use legible handwriting.*
- 3. Use your pencil to complete your quiz.*
- 4. Raise your hand to show that you are finished.*
- 5. Do not use any liquid paper, correction fluid, or any white out.*
- 6. Check all your answers before turning your quiz in.*
- 7. Grammar, mechanics, and spelling mistakes will be graded.*
- 8. Make sure your test includes 6 pages.*

¡Ser mejores siempre!

Part I. Multiple Choice (6 points)

Circle the best option that answers the information requested. (1 point each correct answer)

1. Look at the picture below:



What is weather?

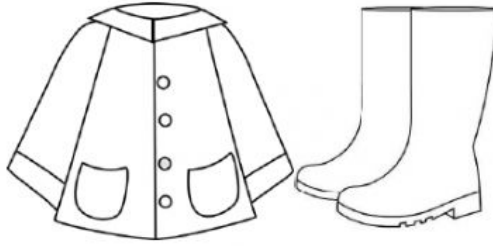
- a. Weather is the one season.
 - b. Weather is one season in a day.
 - c. Weather is what the air looks like outside.
2. Look at the picture below:



What is the rain gauge used for?

- a. To measure the temperature.
- b. To show the direction of the wind.
- c. To measure how much rain falls.


3. Look at the picture below:



In which weather do you wear a raincoat and boots?

- a. Windy.
- b. Rainy.
- c. Sunny.

4. Look at the picture below:



In which weather do you wear a hat and mittens?

- a. Sunny.
- b. Cloudy.
- c. Snowy.

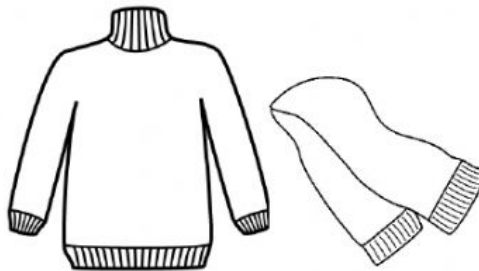
5. Look at the picture below:



In which weather do you wear a dress?

- a. Snowy.
- b. Sunny.
- c. Cloudy.

6. Look at the picture below:



In which weather do you wear a sweater and a scarf?


- a. Rainy.
- b. Windy.
- c. Sunny.

Part II. Matching (3 points, 1 point each correct answer)

Match each picture in column A with the corresponding name of the tools used to measure weather in column B. Write the correct letter inside the parentheses.

Column A

Column B



()

a. Thermometer



()

b. Rain Gauge



()

c. Wind Sock

Part III. Identification (4 points, 1 point each correct answer)

Write the corresponding name of the type of weather in the spaces below the pictures.

Word bank:

Snowy / Windy / Sunny / Rainy



Spring

a. _____



Summer

b. _____



Fall

c. _____



Winter

d. _____