



Santa Rosa de Lima Primary School
SCIENCE SHORT TEST No.2
III Trimester 2021

Third Grade
Teacher Xinia Acuña Solís
Time: 35 minutes

Obtained points: _____
Total points: 20 pts
Score: _____





General Instructions:

1. Read the whole test carefully before you start.
2. Check your test before handing it in.

I Part. Identification. Value 10 points. (1 point each one).

A. Instructions: Complete the chart about **Motion**. (4 pts)

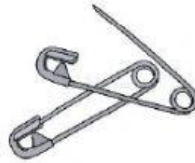
around and around – back and forth – straight line - zigzag

			
---	---	--	---

B. Instructions: Draw an "X" on the objects that are attracted to magnets.
(4 pts)

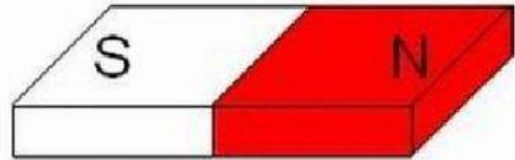
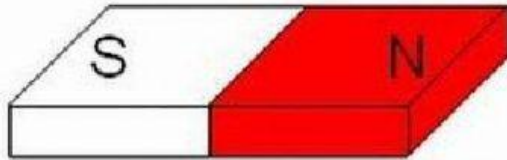









C. Instructions: Complete the picture about **Magnets**. (2 pts)



Opposite poles _____.



Same poles _____.

II Part. Match. Value 10 points. (1 point each one).

Instructions: Match the statements in Column A with the correct words in Column B.

Column A

_____ means to move quickly back and forth.

_____ means how high or low a sound is.

_____ means how loud or soft a sound is.

_____ is the act of moving.

_____ means you push an object one way and then another way.

_____ is how fast or slow an object moves.

_____ means to push away.

_____ means to pull toward.

A _____ is a place on a magnet that has the strongest push or pull.

A _____ makes something move.

Column B

Motion

Attract

Repel

Speed

Force

Zigzag

Volume

Pitch

Vibrate

Pole