


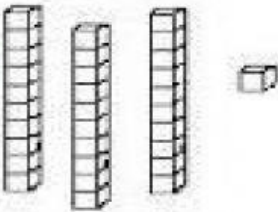

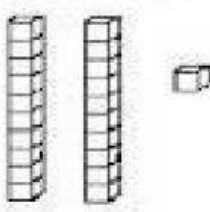

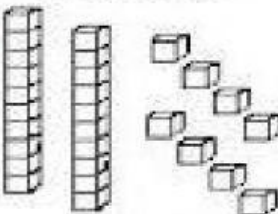





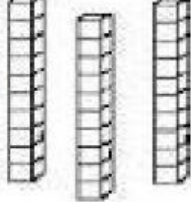

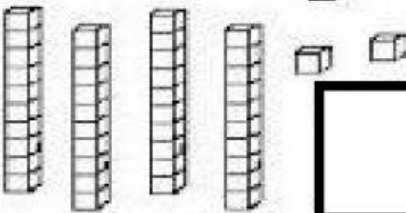

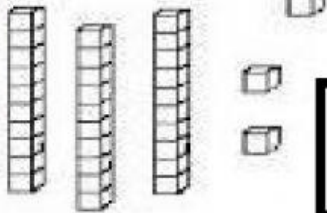
ALUNO(A):

TURMA: PROFESSORA:

MATEMÁTICA

TRABALHANDO COM MATERIAL DOURADO – QUEM JUNTA MAIS?

OBSERVE E CONTE A QUANTIDADE DE PEÇAS DE MATERIAL DOURADO QUE ALGUMAS CRIANÇAS CONSEGUIRAM JUNTAR NO JOGO *QUEM JUNTA MAIS*:

 MARIA  <input type="text"/>	 GABRIEL  <input type="text"/>
 SAMUEL  <input type="text"/>	 HÉLEN  <input type="text"/>
 BRUNA  <input type="text"/>	 ANNY  <input type="text"/>
 EDUARDO  <input type="text"/>	 JÚLIA  <input type="text"/>

43

20

28

31

33

30

21

18

MATEMÁTICA

TRABALHANDO COM MATERIAL DOURADO

VAMOS CONTAR E REGISTRAR A QUANTIDADE NOS QUADRINHOS?

