

↓



↓

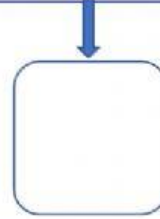
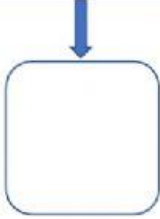
4

6

2?3
●●●



QUANTI SONO? TRASCINA IL RISULTATO




3

8



↓



↓

5

7

2?3
●●●

+

QUANTI SONO? TRASCINA IL RISULTATO



↓



↓

1

2