



Lengkapkan ayat matematik bahagi berikut.



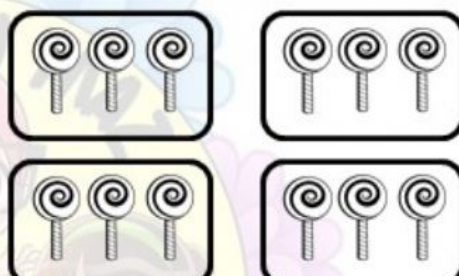
$$8 \div 2 = \boxed{4}$$



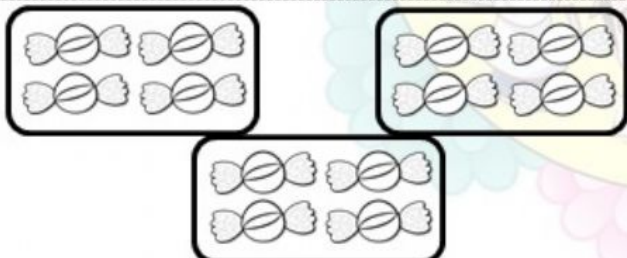
$$6 \div 2 = \boxed{}$$



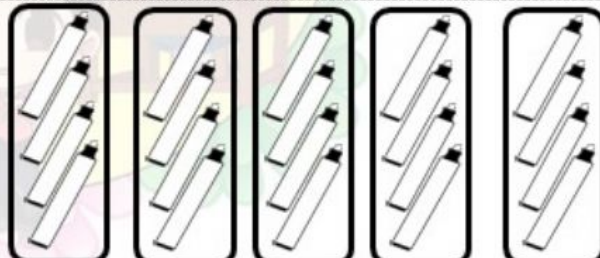
$$18 \div 3 = \boxed{}$$




$$12 \div 3 = \boxed{}$$




$$12 \div 4 = \boxed{}$$



$$20 \div 4 = \boxed{}$$



$$10 \div 5 = \boxed{}$$



$$15 \div 5 = \boxed{}$$