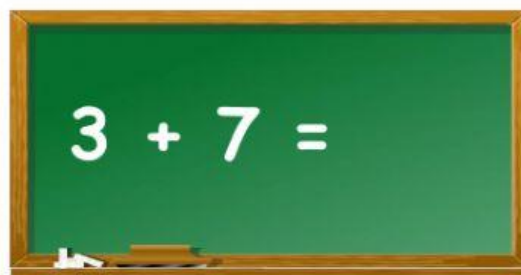
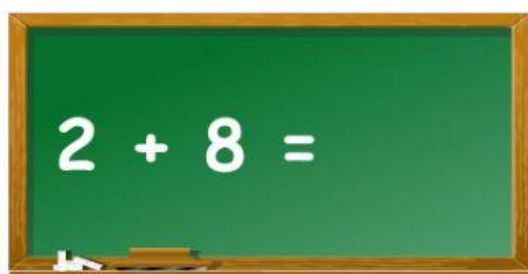


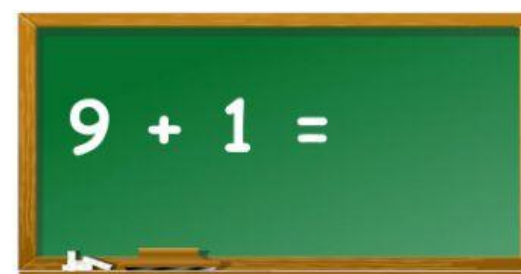
Batalha das DEZENAS!!

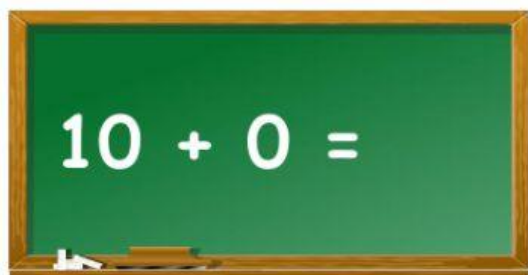
Pense rápido e responda! Vamos ver como estão seus cálculos!

 $5 + 5 =$

 $3 + 7 =$

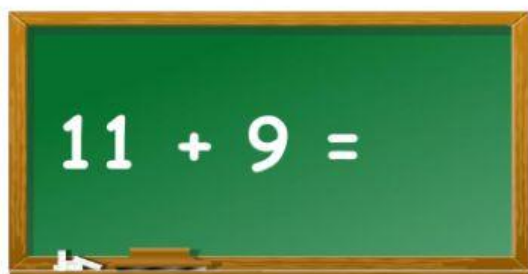
 $2 + 8 =$

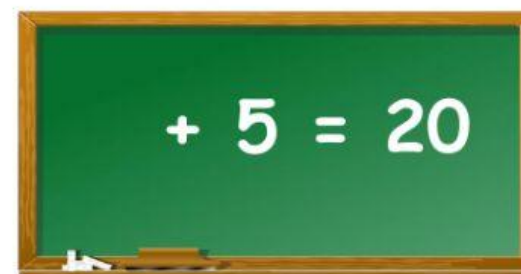
 $9 + 1 =$

 $10 + 0 =$

 $6 + 4 =$

Agora, complete a sentença matemática para que ela fique correta!

 $11 + 9 =$

 $+ 5 = 20$


$$13 + 7 =$$


$$16 + \quad = 20$$


$$18 + 2 =$$


$$10 + \quad = 20$$


$$25 + 5 =$$


$$22 + \quad = 30$$


$$\quad + 10 = 30$$

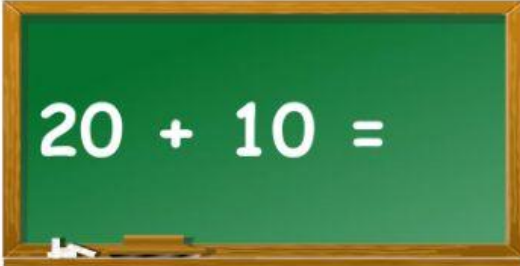

$$21 + 9 =$$



$$23 + \quad = 30$$

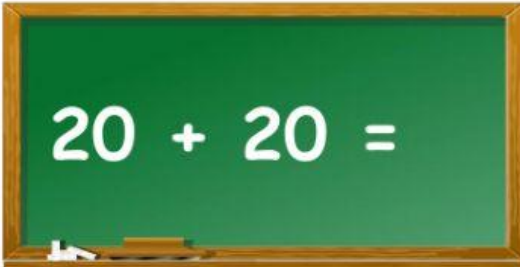

$$24 + 6 =$$

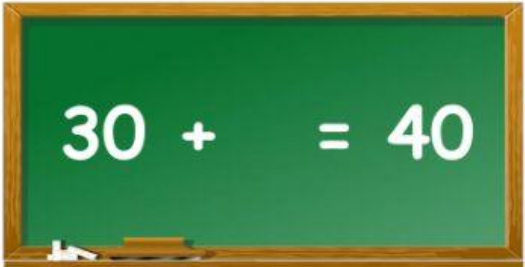
Você já aprendeu que 1 DEZENA = 10 unidades.

Então, vejamos alguns cálculos envolvendo grupos de 10...


$$20 + 10 =$$

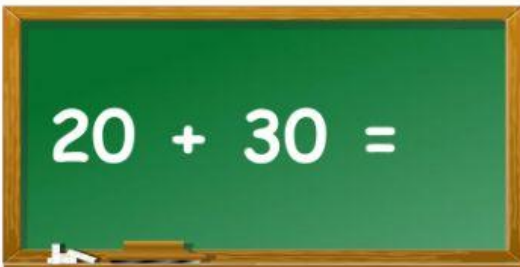

$$30 + = 30$$

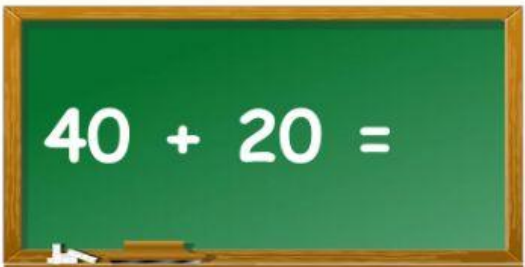

$$20 + 20 =$$


$$30 + = 40$$


$$30 + 30 =$$


$$40 + 10 =$$


$$20 + 30 =$$


$$40 + 20 =$$