


DATE:

NAME:

I. Write the division equation for the given representation:

A.

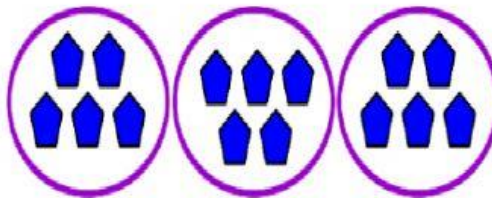


Activity: Multiplication Problems 1

Division Equation: _____



B.



Division Equation: _____



C.

True or false?

There are 4 groups of 5 pencils.

Explain your answer.


False, there are five groups of 4 pencils.

Division Equation: _____




II. Draw the representation for given division equation:


A. $18 \div 3 = \underline{\hspace{2cm}}$



B. $15 \div 5 = \underline{\hspace{2cm}}$



C. $20 \div 4 = \underline{\hspace{2cm}}$



D. $16 \div 4 = \underline{\hspace{2cm}}$

