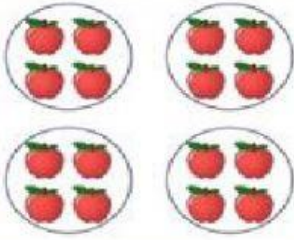


## Repeated addition

1. Fill in the blanks and find out the total.

1




\_\_\_ groups of \_\_\_ apples each.

= \_\_\_ + \_\_\_ + \_\_\_ + \_\_\_

= \_\_\_ × \_\_\_

= \_\_\_

2




\_\_\_ groups of \_\_\_ marbles each.

= \_\_\_ + \_\_\_ + \_\_\_ + \_\_\_ + \_\_\_

= \_\_\_ × \_\_\_

= \_\_\_

3



\_\_\_ groups of \_\_\_ boats each.

= \_\_\_ + \_\_\_ + \_\_\_

= \_\_\_ × \_\_\_

= \_\_\_

2. Write the multiplication facts for the given repeated addition and find out the total.

a.  $6 + 6 + 6 + 6 + 6 =$  \_\_\_  $\times$  \_\_\_  $=$  \_\_\_

b.  $1 + 1 + 1 =$  \_\_\_  $\times$  \_\_\_  $=$  \_\_\_

c.  $8 + 8 =$  \_\_\_  $\times$  \_\_\_  $=$  \_\_\_

d.  $10 + 10 + 10 + 10 =$  \_\_\_  $\times$  \_\_\_  $=$  \_\_\_

e.  $7 + 7 + 7 + 7 =$  \_\_\_  $\times$  \_\_\_  $=$  \_\_\_

3. Write the repeated addition for the given multiplication facts and find out the total.

a.  $5 \times 4 =$  \_\_\_\_\_  $=$  \_\_\_\_\_

b.  $2 \times 3 =$  \_\_\_\_\_  $=$  \_\_\_\_\_

c.  $9 \times 2 =$  \_\_\_\_\_  $=$  \_\_\_\_\_

d.  $6 \times 6 =$  \_\_\_\_\_  $=$  \_\_\_\_\_

e.  $1 \times 7 =$  \_\_\_\_\_  $=$  \_\_\_\_\_

4. There were 5 plants. Each plant had 2 flowers. Write the repeated addition and multiplication fact for this and find out the total.

\_\_\_\_\_  $=$  \_\_\_\_\_  $=$  \_\_\_\_\_

5. Regi has 3 cages. She keeps 4 birds in each cage. Write the repeated addition and multiplication fact for this and find out the answer.

\_\_\_\_\_  $=$  \_\_\_\_\_  $=$  \_\_\_\_\_