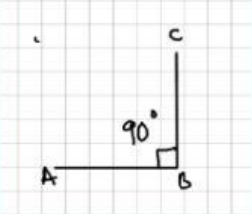

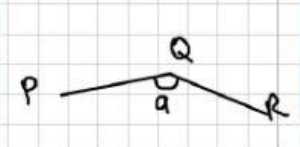

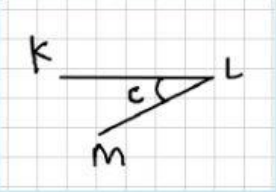

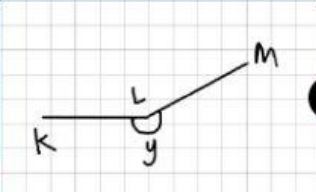



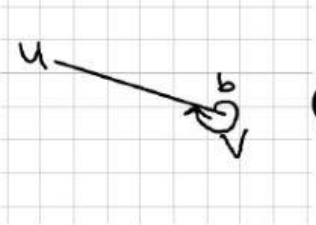



Chapter 8 : Lines and Angles

Exercise 1 : Match the diagram of angles with the correct type of angle.

Diagram		Type of angle
	●	 Acute angle
	●	 Angle on a straight line
	●	 Obtuse angle
	●	 Reflex angle
	●	 Right angle
	●	 Whole turn angle

Exercise 2 : State whether the statement is TRUE or FALSE

1- Reflex angle is in between 180° and 360° .

2- Conjugate angle of 230° is 30° .

3- If the sum of two angles that are side by side is 180° ,
then, the angles are a pair of supplementary angles.

4- Sum of complementary angles is 90° .
