

NAME: .....

YEAR : .....

DATE: .....

## HOW MUCH MONEY DO I NEED ?

1. Round up to the nearest dollar.



1

LOOK AT THE DOLLAR AMOUNT = \$5.50

2

MATCH TO NUMBER LINE = BETWEEN 5 & 6

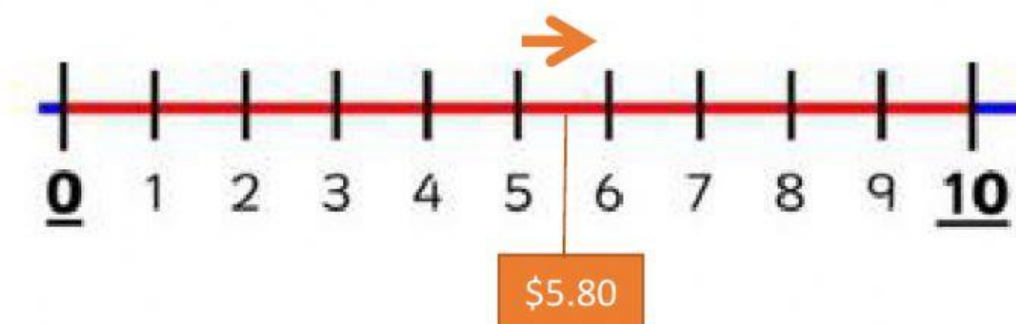
3

MOVE UP ONE DOLLAR →

4

GIVE DOLLAR TO THE CASHIER = \$6.00

2. Round up to the nearest dollar.



1

LOOK AT THE DOLLAR AMOUNT = \$5.80

2

MATCH TO NUMBER LINE = BETWEEN

&

3

MOVE UP ONE DOLLAR



4

GIVE DOLLAR TO THE CASHIER =

3. Round up to the nearest dollar.



1

LOOK AT THE DOLLAR AMOUNT = \$5.40

2

MATCH TO NUMBER LINE = BETWEEN

 & 

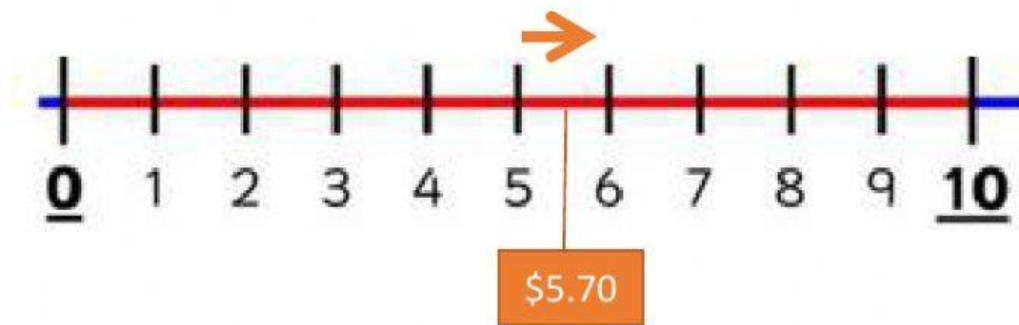
3

MOVE UP ONE DOLLAR →

4

GIVE DOLLAR TO THE CASHIER =

4. Round up to the nearest dollar.



1

LOOK AT THE DOLLAR AMOUNT

2

MATCH TO NUMBER LINE = BETWEEN

&

3

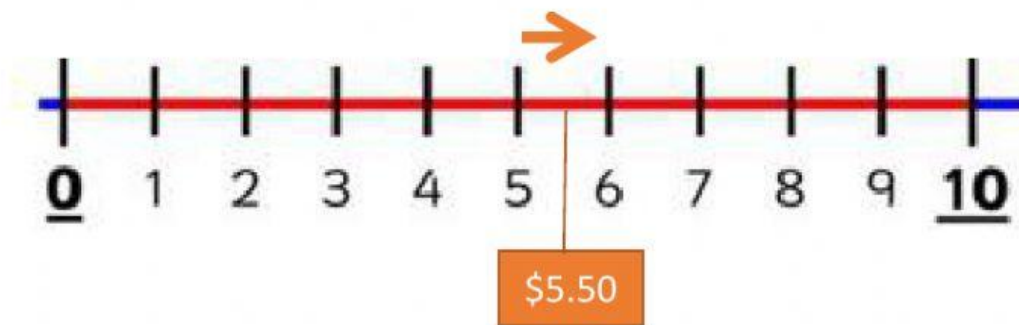
MOVE UP ONE DOLLAR



4

GIVE DOLLAR TO THE CASHIER =

5. Round up to the nearest dollar.



1

LOOK AT THE DOLLAR AMOUNT

2

MATCH TO NUMBER LINE = BETWEEN

&

3

MOVE UP ONE DOLLAR

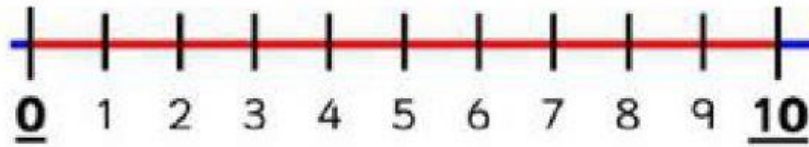


4

GIVE DOLLAR TO THE CASHIER =



6. Round up to the nearest dollar.



Hot Milk  
\$1.80



Hot Chocolate  
\$2.80



Mocha  
\$3.20



Iced Strawberry Blended  
\$5.50

\$6.00

\$2.00

\$4.00

\$3.00