

DATE:

**NAME:**

**I. Write the division equation for the given representation:**

**A.**


Let's share the apples equally.



**Division Equation:**



**B.**



**Division Equation:**



**C.**




**Division Equation:**

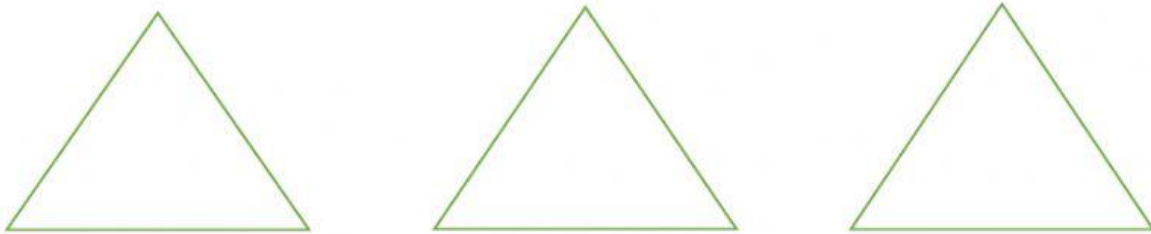


II. Draw the representation for given division equation:


A.  $8 \div 2 = \underline{\hspace{2cm}}$



B.  $9 \div 3 = \underline{\hspace{2cm}}$



C.  $12 \div 4 = \underline{\hspace{2cm}}$



D.  $10 \div 2 = \underline{\hspace{2cm}}$

