











Jane recorded the number of animals found in a pet shop.

Cats	 
Hamsters	  
White mice	   
Rabbits	

Using data from the table above, complete the following table.

Animals	Number of Animals
Cats	9
Hamsters	
White mice	
Rabbits	

Study the table and fill in the blanks.

- (a) There were 18 white mice in the pet shop.
- (b) There were \_\_\_\_\_ cats in the pet shop.
- (c) There were \_\_\_\_\_ more hamsters than cats in the pet shop.
- (d) Three times as many \_\_\_\_\_ as rabbits were found in the pet shop.
- (e) The animals with the greatest number in the pet shop were the \_\_\_\_\_.
- (f) The animals with the least number in the pet shop were the \_\_\_\_\_.