



Pakistan International School, Jeddah
Cambridge Curriculum Section (CCS)
(Session 2021-2022)

Name of Student: _____

Date: _____

Unit: 5 Addition and subtraction 1

Topic: Subtraction: counting back

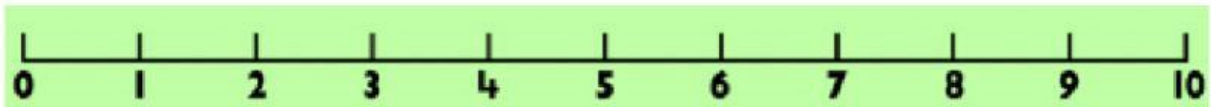
Q.1 Subtract by finding the larger number and counting back.

a) Sara had **10** flowers, but she gave **4** to her friend.



How many does she have left?

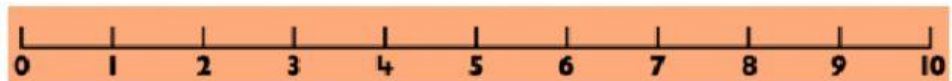
b) Tim found **7** pencils., but lost **3**.



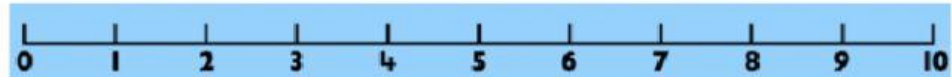
How many does he have left?

Q.2 Take away by counting back.

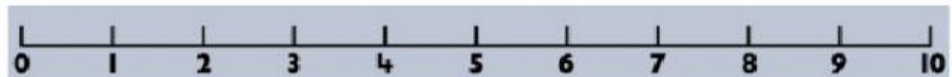
a) $8 - 5 =$




b) $6 - 4 =$



c) $5 - 2 =$



d) $9 - 3 =$



e) $10 - 5 =$

