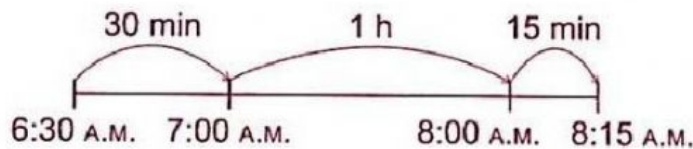


Name: _____

Telling Time Word Problem

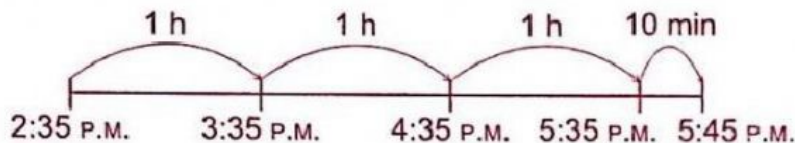
Solve. Match the timeline and the answer.

1. Lissa exercises every morning. She starts at 6:30 A.M. and ends at 8:15 A.M. How long does she exercise?



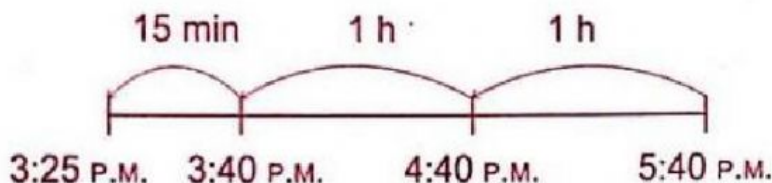
She exercises for _____ (type hour and minutes, not h and min)

2. Suki started reading a book at 2:35 P.M. She took 3 hours 10 minutes to finish the book. What time did she finish reading the book?



She finished reading the book at _____ (type also A.M. or P.M.)

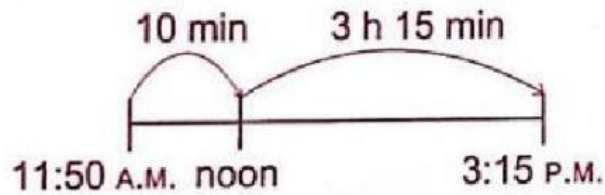
3. Devi went to the library. She was there for 2 hours 15 minutes. She left the library at 5:40 P.M. What time did she get to the library?



She went to the library at _____ (type also A.M. or P.M.)

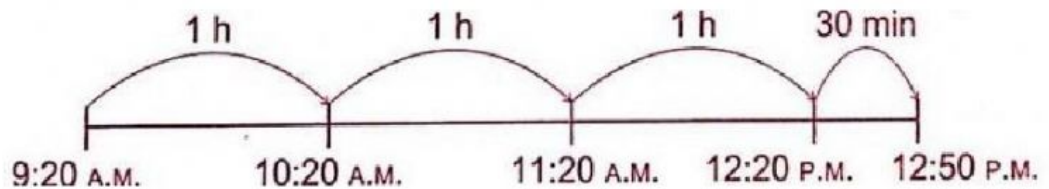
Name: _____

4. Nelson visited his friend's house from 11:50 A.M. to 3:15 P.M. How long was his visit?



His visit was _____ long. (type hours and minutes, not h and min)

5. Mr. Marcus took 3 hours 30 minutes to decorate his classroom. He started at 9:20 A.M. What time did he finish?



He finished at _____ (type also A.M. or P.M.)