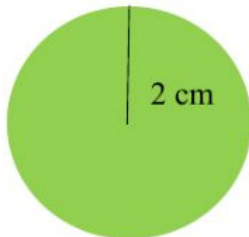


## Math sheet 2

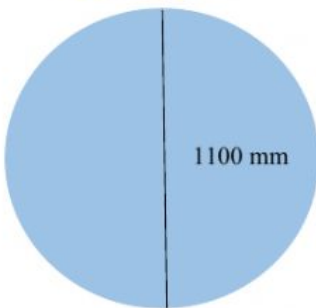
Name: \_\_\_\_\_

Class: \_\_\_\_\_

Activity 6: Calculate area:

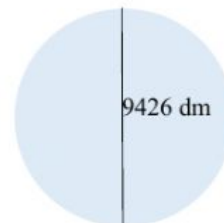
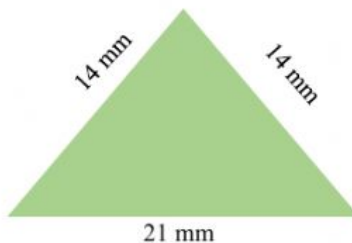


Area:



Area:

Activity 7: Match each area with its shape:



0,49 dm<sup>2</sup> | 48 mm<sup>2</sup> | 139.493.677,32 dm<sup>2</sup> | 139.493.677,52 dm<sup>2</sup>

Activity 8: Select dm<sup>2</sup> and then calculate:

a) 8 + 9 = mm

b) 7 + 12 = dam