



Actividad de matemática

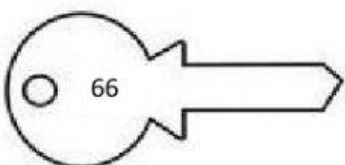
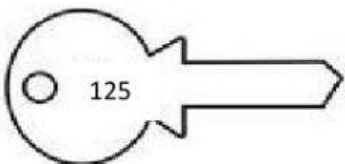
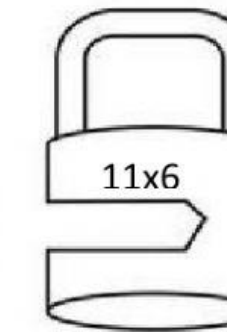
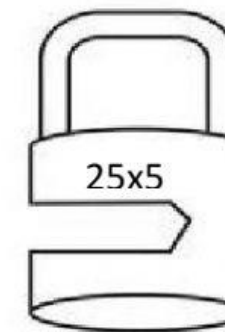
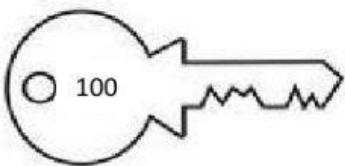
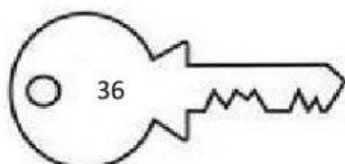
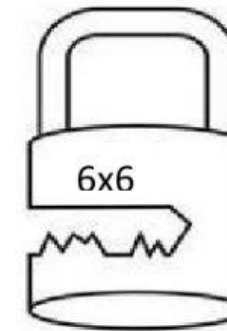
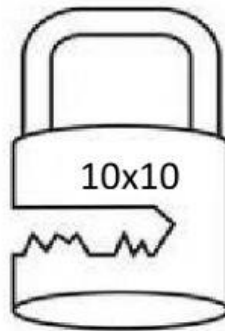
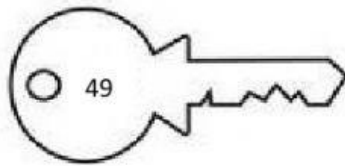
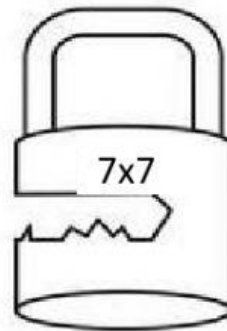
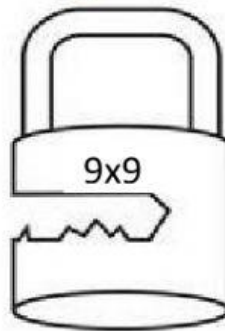



Apellidos y nombres:.....Curso:.....fecha:...../...../.....

1. En el siguiente cuadro completa con los números: 1,2,3 y 4 pero que no se repita en las columnas ni en las filas.

3			1
1		3	
4		2	

2. Realiza las siguientes multiplicaciones y traslada con una línea la respuesta correcta.





Sumamos y restamos



A crossword puzzle grid with various math problems. The grid is composed of white squares for text and black squares for empty space. The problems are as follows:

- Across 1: $4 - 2 =$
- Across 2: $-$
- Across 3: 1
- Across 4: $=$
- Across 5: $-$
- Across 6: $7 = 2$
- Across 7: $+$
- Across 8: $6 =$
- Across 9: $=$
- Across 10: $-$
- Across 11: $= 5$
- Across 12: $-$
- Across 13: 1
- Across 14: $3 - =$
- Across 15: $=$
- Across 16: $9 - =$
- Across 17: $+$
- Across 18: $5 =$
- Across 19: $3 + 3 =$
- Across 20: $- 4 =$
- Down 1: $+$
- Down 2: $=$
- Down 3: $-$
- Down 4: 6
- Down 5: $=$
- Down 6: $-$
- Down 7: $=$
- Down 8: 5
- Down 9: $+$
- Down 10: $=$
- Down 11: 5
- Down 12: $=$