

Anglo American School
Math Quiz #1
II Semester



Name: _____

Assessment	
*Understands and applies basic concepts and properties related to measurement. (Part 1 A)	
*Understands and applies basic concepts and properties related to measurement. (Part 1 B)	
*Understands and applies basic concepts and properties related to measurement. (Part 1 C)	
*Uses adequate procedures to solve basic operations. (Part 2)	

Part1. MEASUREMENT

A. Write the digital time to match each analog clock face.

1.



<div>□ □</div>

2.



<div>□ □</div>

3.



<div>□ □</div>

4.



<div>□ □</div>


5.



6.



7.



8.



B. Look at each clock and the description of what is happening at that time. In the box write down whether is a.m. or p.m.

1.




You are waking up.

2.




You are leaving school.

3.



You are playing with your friends.

4.



You are eating dinner.

C. Answer the following question using the calendar below.

July 2021

Sunday	Monday	Tuesday	Wednesday	Thursday	Friday	Saturday
				1	2	3
4	5	6	7	8	9	10
11	12	13	14	15	16	17
18	19	20	21	22	23	24
25	26	27	28	29	30	31

1. What day on the calendar is July 27th? _____
2. How many Tuesdays are there in July? _____
3. The Annexation of the Partido de Nicoya is on July 25th. Which day of the week is? _____
4. There are _____ days in July.

Part 2. BASIC OPERATIONS

A. Solve the following divisions.

$$55 \div 5 = \underline{\quad}$$

$$12 \div 2 = \underline{\quad}$$

$$27 \div 3 = \underline{\quad}$$

$$8 \div 2 = \underline{\quad}$$

$$45 \div 5 = \underline{\quad}$$

$$10 \div 10 = \underline{\quad}$$

$$9 \div 3 = \underline{\quad}$$

$$15 \div 3 = \underline{\quad}$$

$$35 \div 5 = \underline{\quad}$$

$$14 \div 2 = \underline{\quad}$$

$$36 \div 3 = \underline{\quad}$$

$$28 \div 4 = \underline{\quad}$$

$$3 \div 3 = \underline{\quad}$$

$$10 \div 5 = \underline{\quad}$$

$$2 \div 2 = \underline{\quad}$$