

Practice Questions

Section A: Multiple-choice questions

For each question, 4 options are given. One of them is the correct answer. Make your choice (1, 2, 3 or 4). Write your answer in the brackets provided.

1. Which statement is **incorrect**?
- (1) Light is matter.
 - (2) Light is a form of energy.
 - (3) Light allows us to see objects around us.
 - (4) Light is important in some life processes. ()

Study the following table and answer questions 2 and 3.

Group A	Group B
Sun	Fire
Firefly	Table lamp
X	Y

2. Which of the following shows suitable headings for groups A and B?

	Group A	Group B
(1)	Natural sources of light	Artificial sources of light
(2)	Non-matter	Matter
(3)	Living things	Non-living things
(4)	Give off heat	Do not give off heat

()

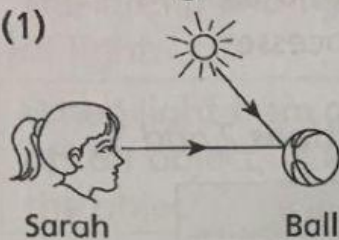
3. Which examples best fit X and Y?

	X	Y
(1)	Star	Moon
(2)	Lighted candle	Star
(3)	Lightning	Lighted candle
(4)	Lightning	Moon

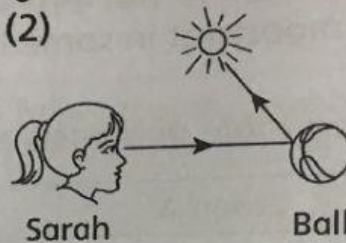
()

4. Which diagram shows why Sarah is able to see the ball?

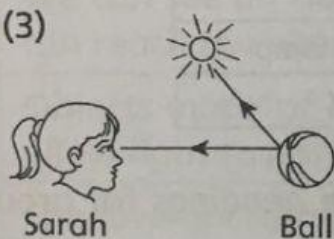
(1)



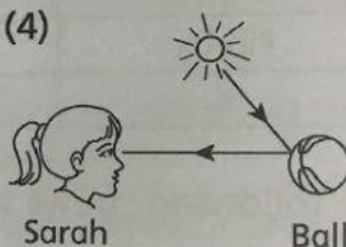
(2)



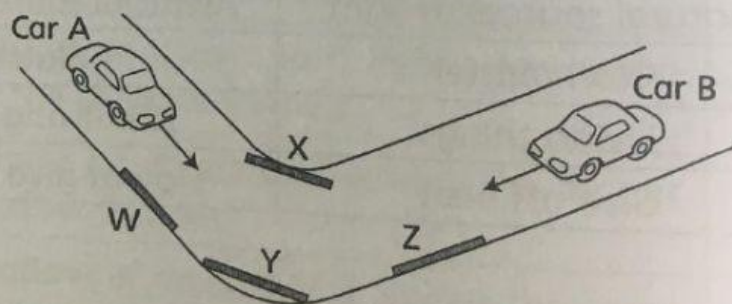
(3)



(4)



5. Study the diagram below.



Which mirror will enable the drivers in cars A and B to see each other?

(1) W

(2) X

(3) Y

(4) Z