
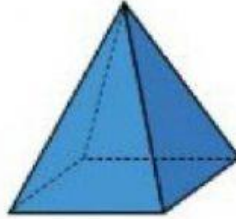

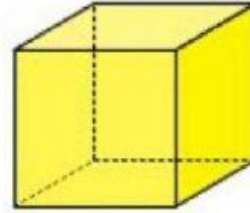
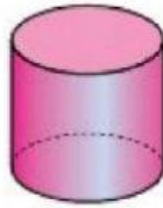



SÓLIDOS GEOMÉTRICOS

ESCRIBE el nombre de cada sólido geométrico.



RELACIONA cada objeto con el sólido geométrico que tenga forma parecida.

