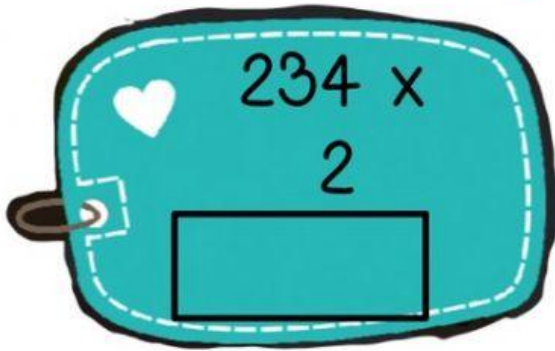
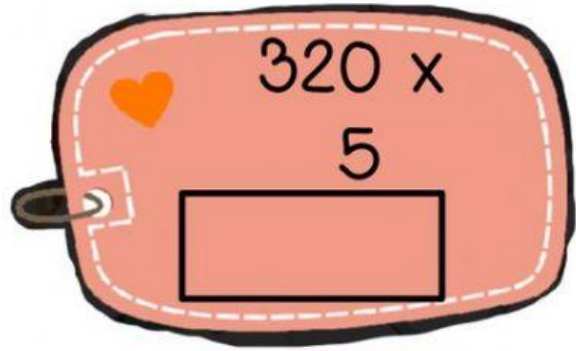
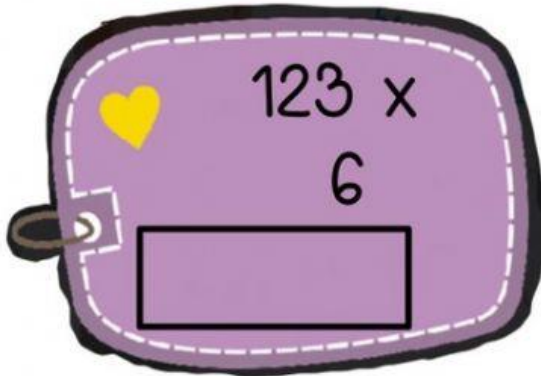



แบบฝึกหัดการคูณ

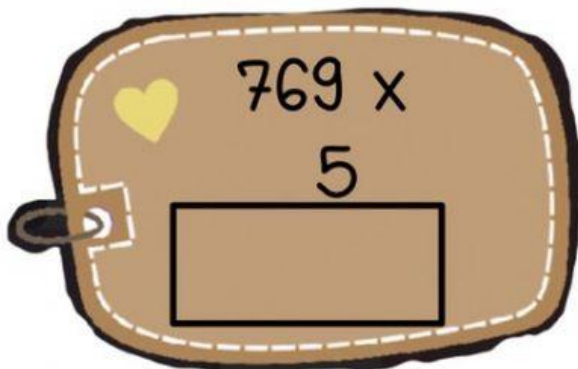
ชื่อ.....
ชั้น ป.3/.....เลขที่.....



$$\begin{array}{r} 234 \times \\ 2 \\ \hline \end{array}$$

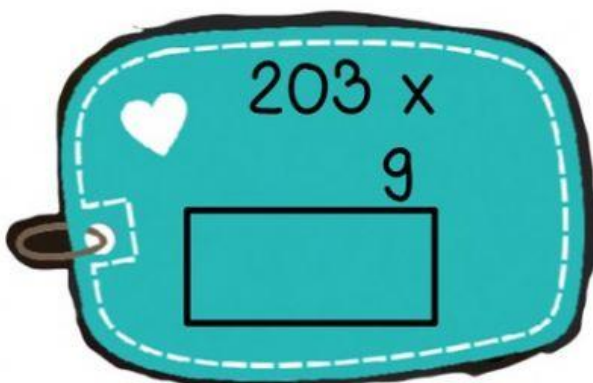

$$\begin{array}{r} 320 \times \\ 5 \\ \hline \end{array}$$

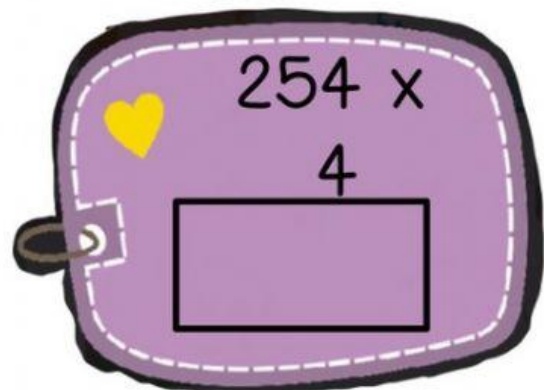

$$\begin{array}{r} 123 \times \\ 6 \\ \hline \end{array}$$



$$\begin{array}{r} 950 \times \\ 7 \\ \hline \end{array}$$

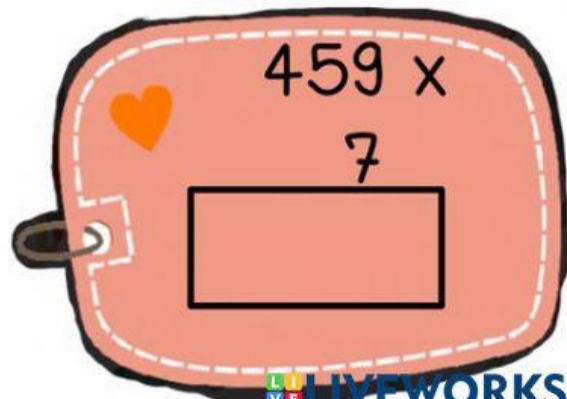

$$\begin{array}{r} 769 \times \\ 5 \\ \hline \end{array}$$


$$\begin{array}{r} 803 \times \\ 3 \\ \hline \end{array}$$


$$\begin{array}{r} 203 \times \\ 9 \\ \hline \end{array}$$


$$\begin{array}{r} 254 \times \\ 4 \\ \hline \end{array}$$


$$\begin{array}{r} 555 \times \\ 2 \\ \hline \end{array}$$


$$\begin{array}{r} 459 \times \\ 7 \\ \hline \end{array}$$