

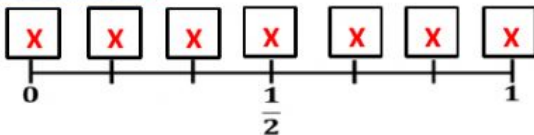


# PROBABILITY SCALE



## Answer all questions below

Question 1: On the probability scale, select your answer by clicking the box, the probability that the dice lands on an even number.



Question 2: There are 8 marbles in a bag.

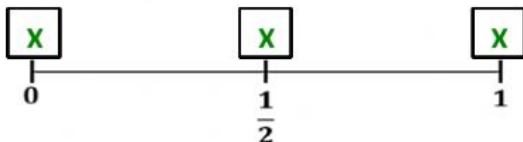
4 marbles are red

3 marbles are blue

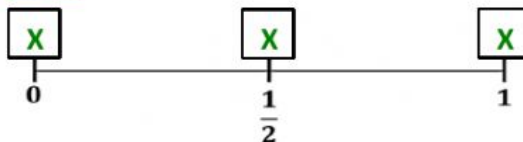
1 marble is green

One marble is selected at random from the bag.

a) On the probability scale, select your answer by clicking the box, the probability that the marble is red.



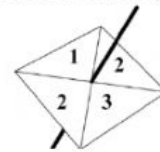
b) On the probability scale, select your answer by clicking the box, the probability that the marble is yellow.



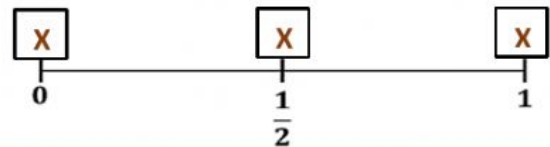
c) Write down the probability that marble is blue.

Answer: —

Question 3: Razi spin a fair 4-sided spinner.

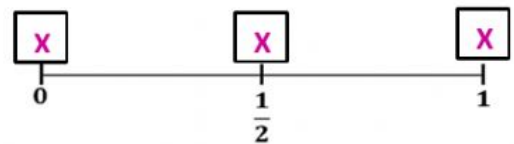


On the probability scale, select your answer by clicking the box, the probability that spinner lands on 2.



Question 4: Waliy rolls an ordinary 6-sided dice.

a) Select your answer by clicking the box, the probability that Waliy gets an 8.



b) Select your answer by clicking the box, the probability that Waliy gets an odd number.

